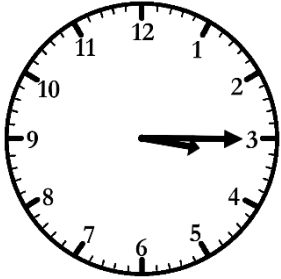


# Matching Times

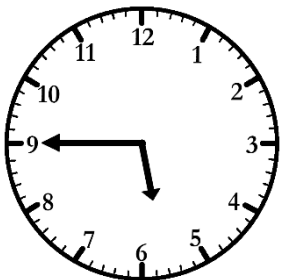
## Quarter Past & Quarter To

Draw lines to connect the matching times.



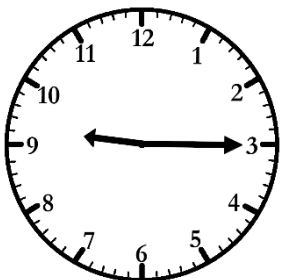
5:45

quarter to 12



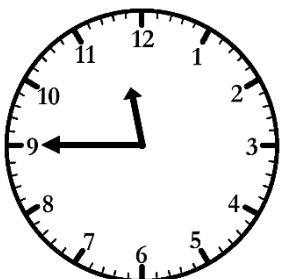
11:45

quarter past 10



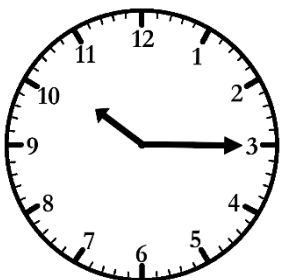
3:15

quarter past 3



10:15

quarter past 9



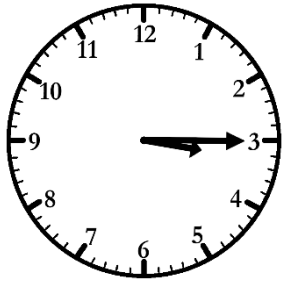
9:15

quarter to 6

# Matching Times Answers

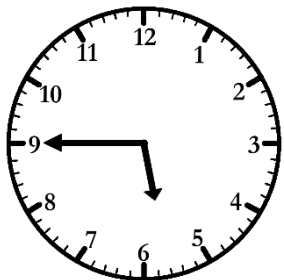
## Quarter Past & Quarter To

Draw lines to connect the matching times.



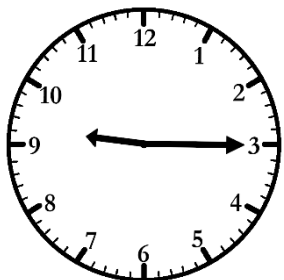
5:45

quarter to 12



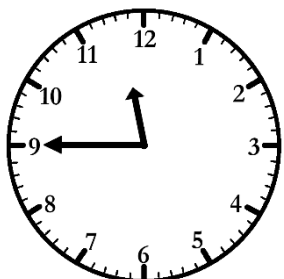
11:45

quarter past 10



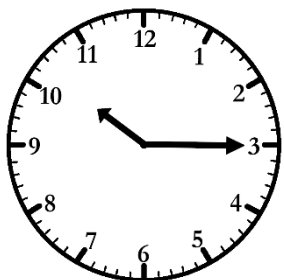
3:15

quarter past 3



10:15

quarter past 9



9:15

quarter to 6