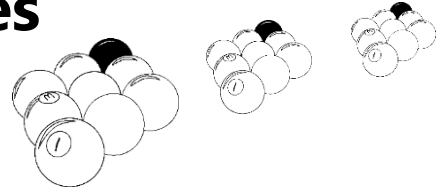
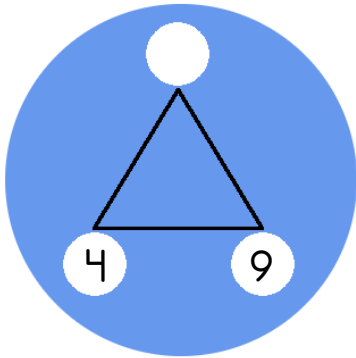


9x

Fact Families



Complete the fact families.

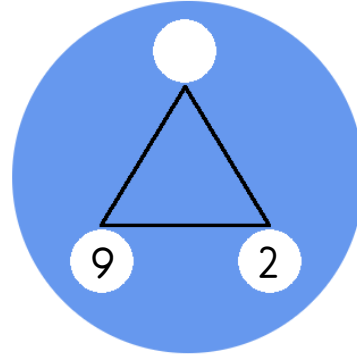


$___ \times ___ = ___$

$___ \times ___ = ___$

$___ \div ___ = ___$

$___ \div ___ = ___$

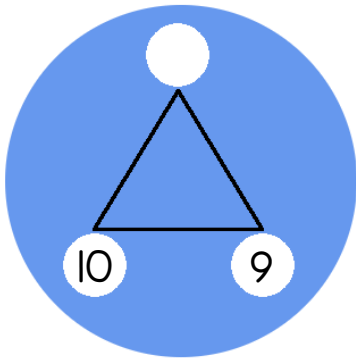


$___ \times ___ = ___$

$___ \times ___ = ___$

$___ \div ___ = ___$

$___ \div ___ = ___$

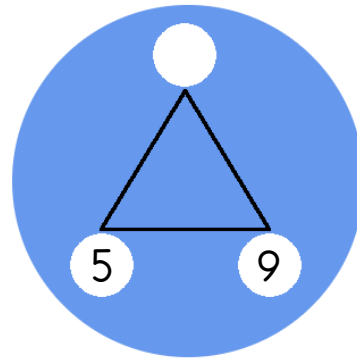


$___ \times ___ = ___$

$___ \times ___ = ___$

$___ \div ___ = ___$

$___ \div ___ = ___$

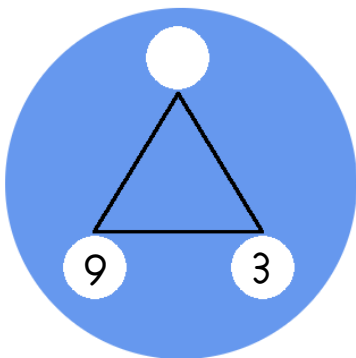


$___ \times ___ = ___$

$___ \times ___ = ___$

$___ \div ___ = ___$

$___ \div ___ = ___$

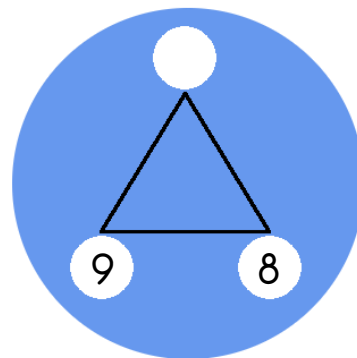


$___ \times ___ = ___$

$___ \times ___ = ___$

$___ \div ___ = ___$

$___ \div ___ = ___$

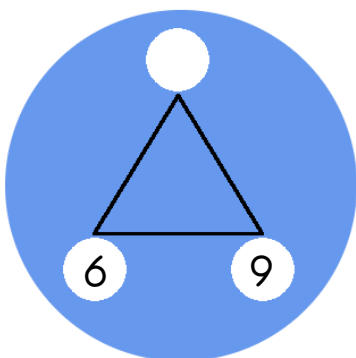


$___ \times ___ = ___$

$___ \times ___ = ___$

$___ \div ___ = ___$

$___ \div ___ = ___$

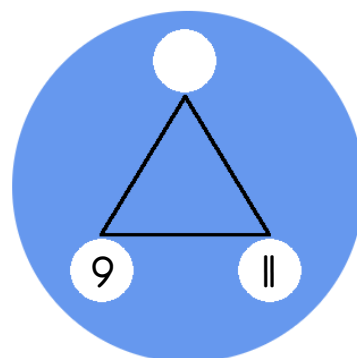


$___ \times ___ = ___$

$___ \times ___ = ___$

$___ \div ___ = ___$

$___ \div ___ = ___$



$___ \times ___ = ___$

$___ \times ___ = ___$

$___ \div ___ = ___$

$___ \div ___ = ___$

