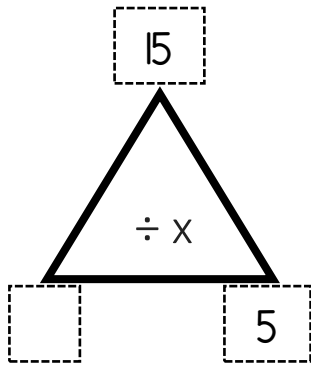


Fact Families Triangles

Missing Factors

Work out the missing factor in each fact family triangle.
Write the matching equations.

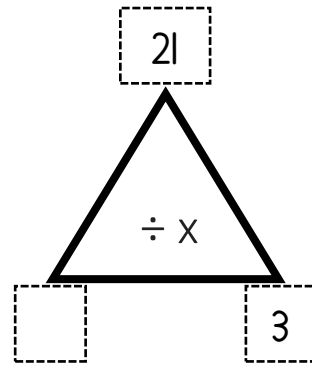


$___ \times ___ = ___$

$___ \times ___ = ___$

$___ \div ___ = ___$

$___ \div ___ = ___$

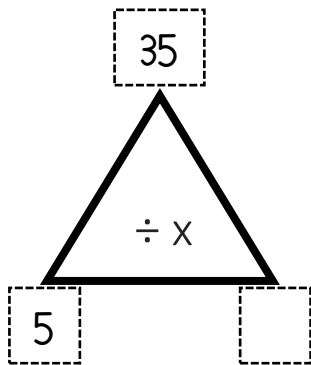


$___ \times ___ = ___$

$___ \times ___ = ___$

$___ \div ___ = ___$

$___ \div ___ = ___$

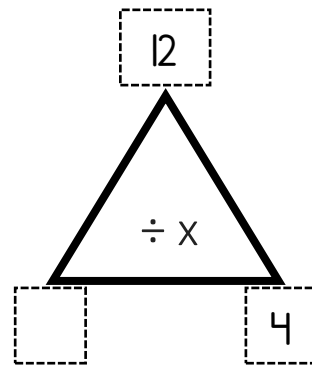


$___ \times ___ = ___$

$___ \times ___ = ___$

$___ \div ___ = ___$

$___ \div ___ = ___$

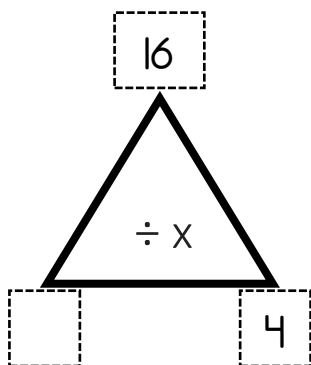


$___ \times ___ = ___$

$___ \times ___ = ___$

$___ \div ___ = ___$

$___ \div ___ = ___$

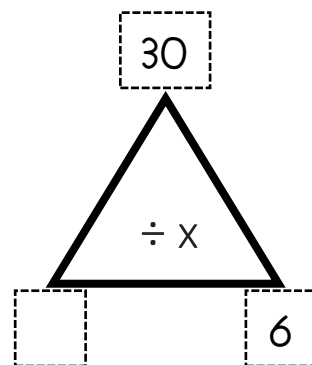


$___ \times ___ = ___$

$___ \times ___ = ___$

$___ \div ___ = ___$

$___ \div ___ = ___$

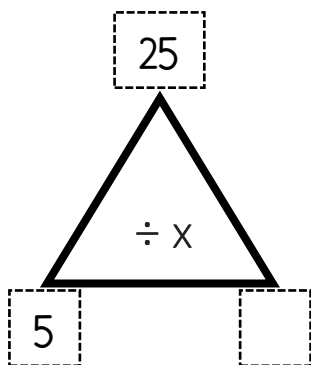


$___ \times ___ = ___$

$___ \times ___ = ___$

$___ \div ___ = ___$

$___ \div ___ = ___$

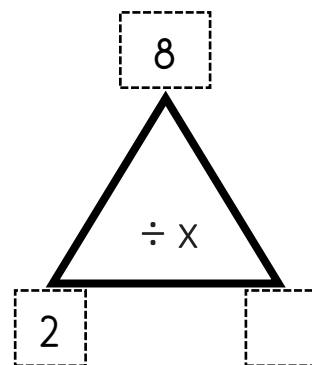


$___ \times ___ = ___$

$___ \times ___ = ___$

$___ \div ___ = ___$

$___ \div ___ = ___$



$___ \times ___ = ___$

$___ \times ___ = ___$

$___ \div ___ = ___$

$___ \div ___ = ___$