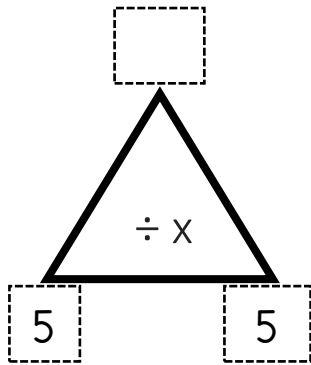


Fact Families Triangles

Missing Products

The product is missing in each fact family triangle.
Work it out then write the matching equations.

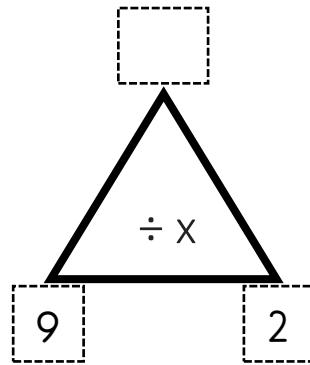


$___ \times ___ = ___$

$___ \times ___ = ___$

$___ \div ___ = ___$

$___ \div ___ = ___$

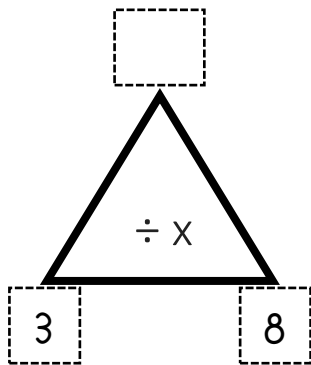


$___ \times ___ = ___$

$___ \times ___ = ___$

$___ \div ___ = ___$

$___ \div ___ = ___$

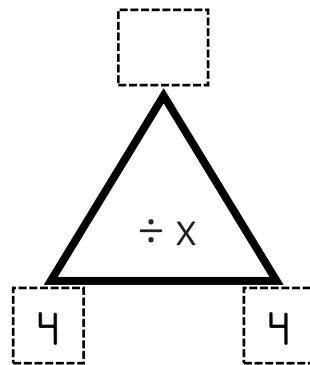


$___ \times ___ = ___$

$___ \times ___ = ___$

$___ \div ___ = ___$

$___ \div ___ = ___$

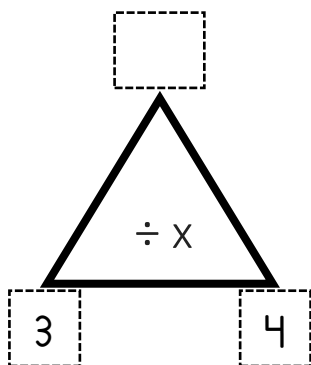


$___ \times ___ = ___$

$___ \times ___ = ___$

$___ \div ___ = ___$

$___ \div ___ = ___$

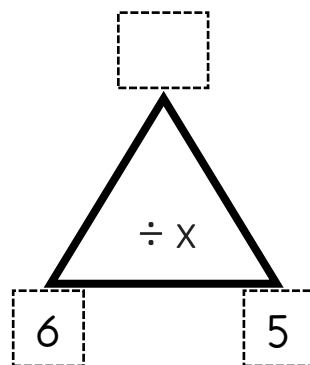


$___ \times ___ = ___$

$___ \times ___ = ___$

$___ \div ___ = ___$

$___ \div ___ = ___$

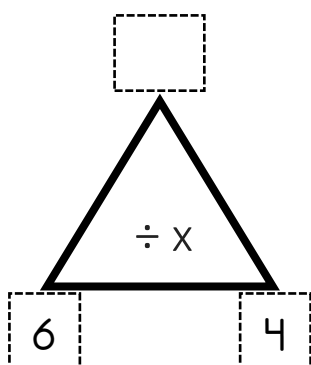


$___ \times ___ = ___$

$___ \times ___ = ___$

$___ \div ___ = ___$

$___ \div ___ = ___$

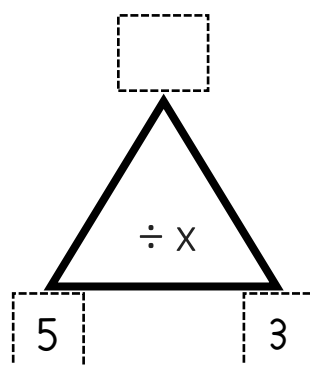


$___ \times ___ = ___$

$___ \times ___ = ___$

$___ \div ___ = ___$

$___ \div ___ = ___$



$___ \times ___ = ___$

$___ \times ___ = ___$

$___ \div ___ = ___$

$___ \div ___ = ___$