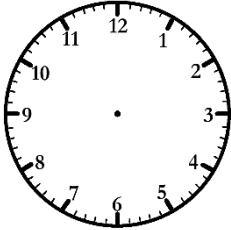



Representing Time in Different Ways

5 Minute Intervals

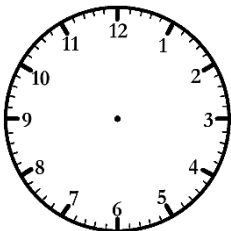
Read the times and represent in **analogue** and **digital** forms.



9:05




:

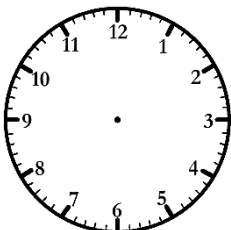


:


twenty-five to 3



:



7:55

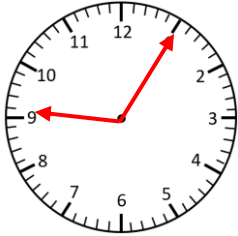


:

Representing Time in Different Ways **Answers**


5 Minute Intervals

Read the times and represent in **analogue** and **digital** forms.



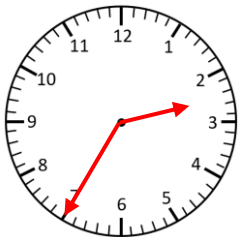
9:05

five past 9




10:10

ten past 10



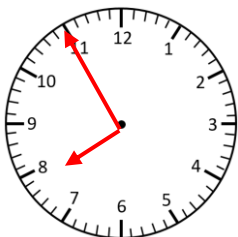
2:35

twenty-five to 3




11:40

twenty to 12



7:55

five to 8



2:50

ten to 3