




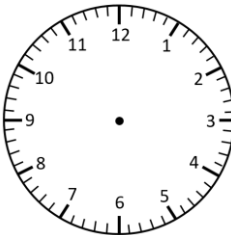
# Representing Time in Different Ways

5 Minute Intervals


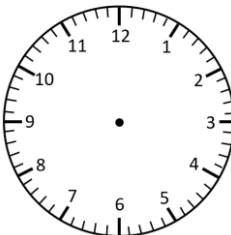
Read the times and represent in **analogue** and **digital** forms.




---



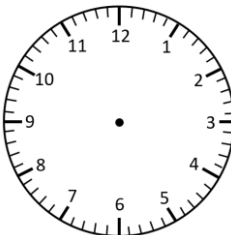
---





quarter to 7



---



---




---

# Representing Time in Different Ways **Answers**

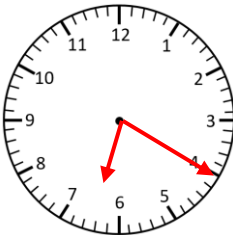
## 5 Minute Intervals

Read the times and represent in **analogue** and **digital** forms.



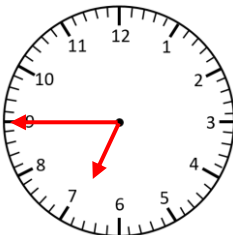
**8:25**

twenty-five past 8



**6:20**

twenty past 6



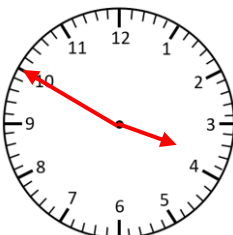
**6:45**

quarter to 7




**12:50**

ten to 1



**3:50**

ten to 4



**10:05**

five past 10