


# Number Line Addition

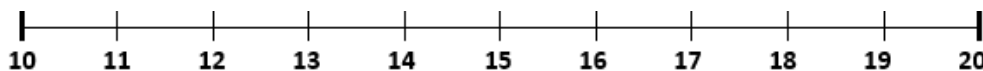
Addition & Subtraction Strategies



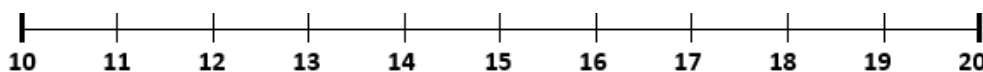
Use the number lines to solve the following.

Remember to start from the largest number and then jump the smaller number.

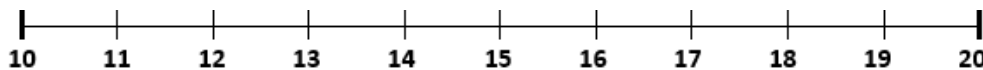
$16 + 2 = \underline{\quad}$



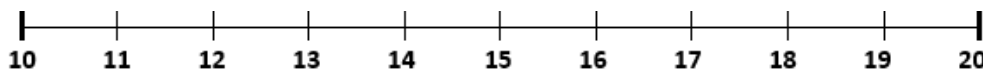
$17 + 3 = \underline{\quad}$



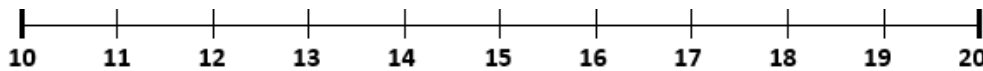
$11 + 5 = \underline{\quad}$



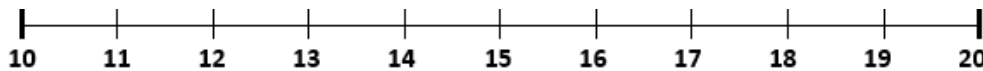
$3 + 12 = \underline{\quad}$



$1 + 15 = \underline{\quad}$

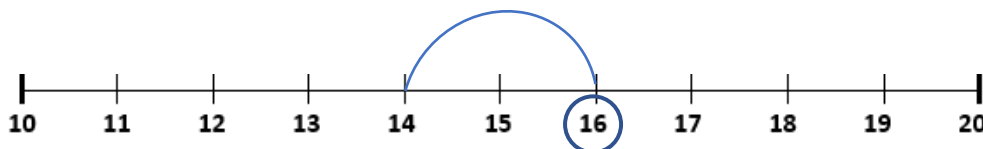


$3 + 14 = \underline{\quad}$



Write the equation that matches the number line.

$\underline{\quad} + \underline{\quad} = \underline{\quad}$



$\underline{\quad} + \underline{\quad} = \underline{\quad}$

