


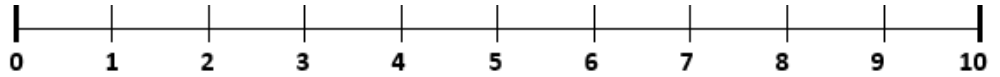
# Number Line Subtraction

Addition & Subtraction Strategies



Use the number lines to solve the following:

$9 - 3 = \underline{\quad}$



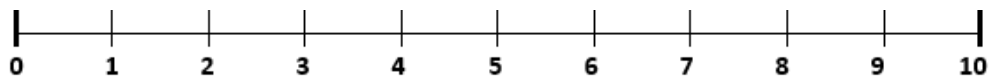
$6 - 2 = \underline{\quad}$



$8 - 1 = \underline{\quad}$



$10 - 2 = \underline{\quad}$



$7 - 3 = \underline{\quad}$

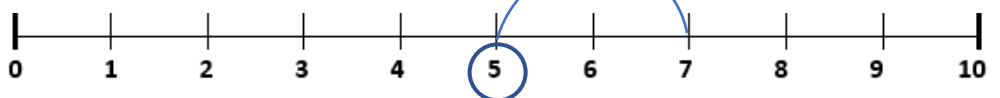


$4 - 3 = \underline{\quad}$



Write the equation that matches the number line.

$\underline{\quad} - \underline{\quad} = \underline{\quad}$



$\underline{\quad} - \underline{\quad} = \underline{\quad}$

