
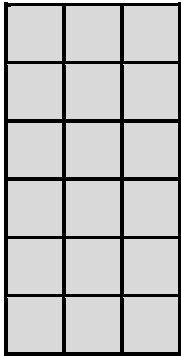


# Perimeter

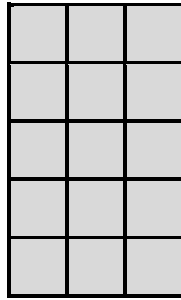
To find the **perimeter** of a shape, add together the length of each side.

Find the perimeter of the following rectangles.

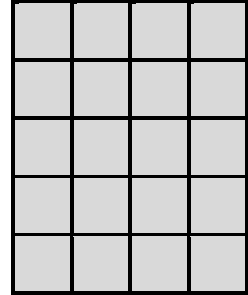
 = 1 cm<sup>2</sup>



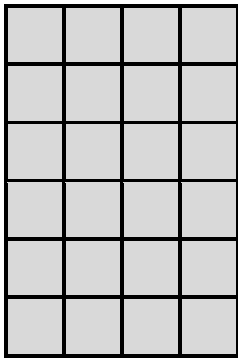
Perimeter = \_\_\_\_ cm




Perimeter = \_\_\_\_ cm




Perimeter = \_\_\_\_ cm



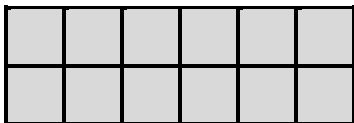
Perimeter = \_\_\_\_ cm



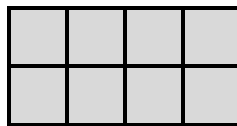
Perimeter = \_\_\_\_ cm



Perimeter = \_\_\_\_ cm



Perimeter = \_\_\_\_ cm



Perimeter = \_\_\_\_ cm



Perimeter = \_\_\_\_ cm

Draw shapes with a perimeter of:

**a)** 10 cm


**b)** 8 cm

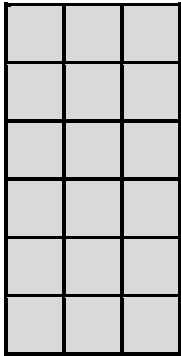


# Perimeter Answers

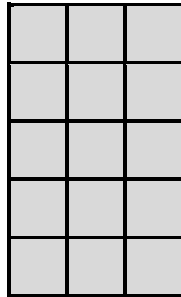
To find the **perimeter** of a shape, add together the length of each side.

Find the perimeter of the following rectangles.

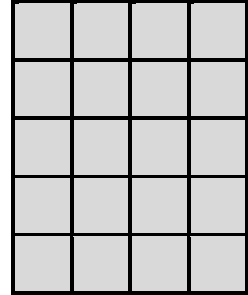
 = 1 cm<sup>2</sup>



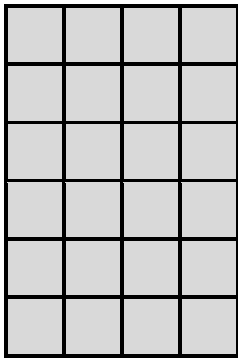
Perimeter = 18 cm




Perimeter = 16 cm




Perimeter = 18 cm



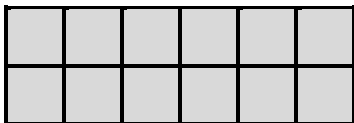
Perimeter = 20 cm



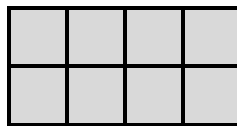
Perimeter = 24 cm



Perimeter = 20 cm



Perimeter = 16 cm



Perimeter = 12 cm



Perimeter = 18 cm

Draw shapes with a perimeter of:

a) 10 cm

b) 8 cm

