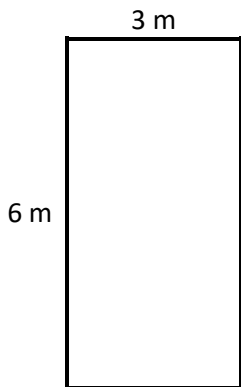


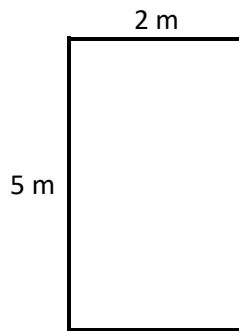
Calculating Perimeter

Perimeter of a Rectangle = Side + Side + Side + Side

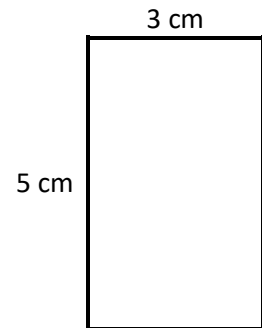
Find the perimeter of the following shapes.



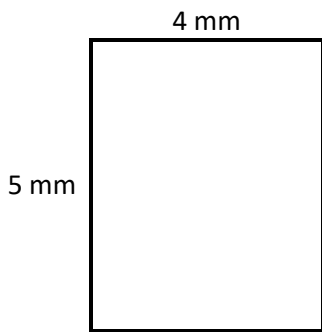
Perimeter = ____ m



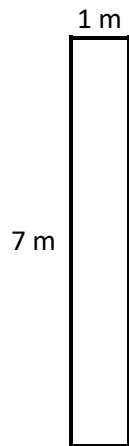
Perimeter = ____ m



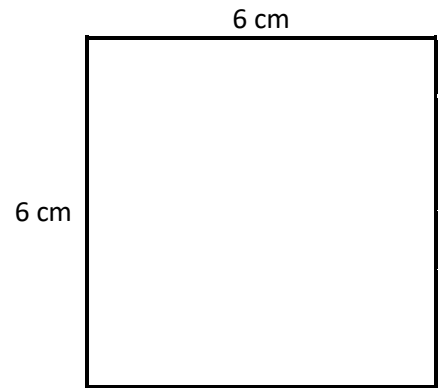
Perimeter = ____ cm



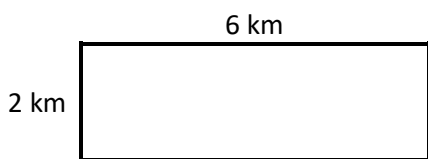
Perimeter = ____ mm



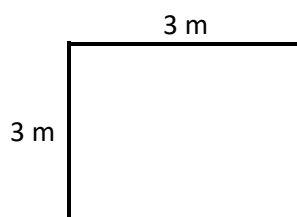
Perimeter = ____ m



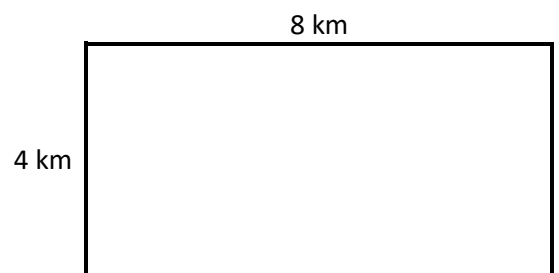
Perimeter = ____ cm



Perimeter = ____ km



Perimeter = ____ m



Perimeter = ____ km

Draw shapes with a perimeter of:

a) 10 cm

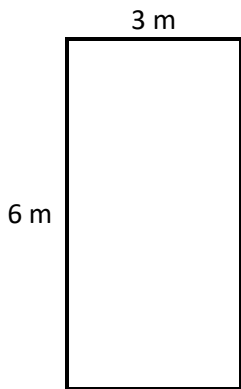
b) 8 cm



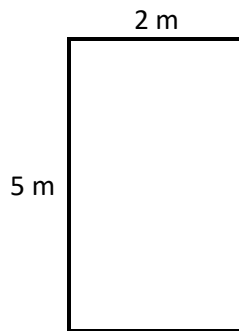
Calculating Perimeter **Answers**

Perimeter of a Rectangle = Side + Side + Side + Side

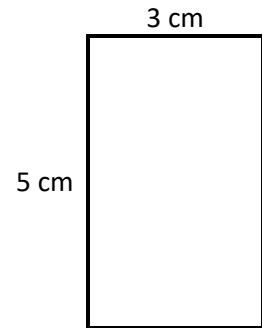
Find the perimeter of the following shapes.



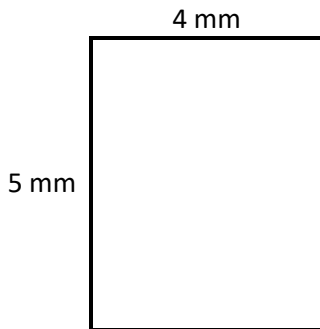
Perimeter = **18** m



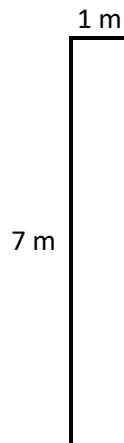
Perimeter = **14** m



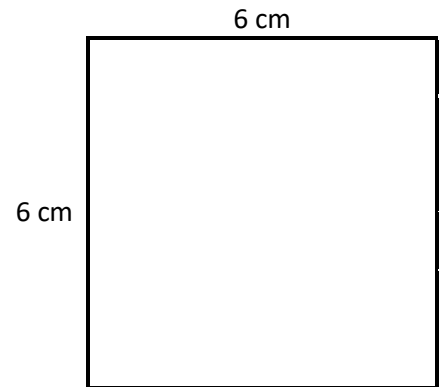
Perimeter = **16** cm



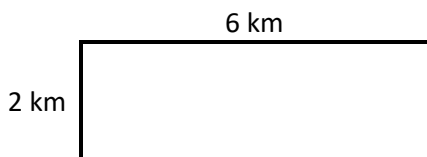
Perimeter = **18** mm



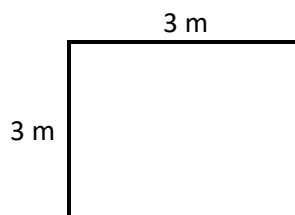
Perimeter = **16** m



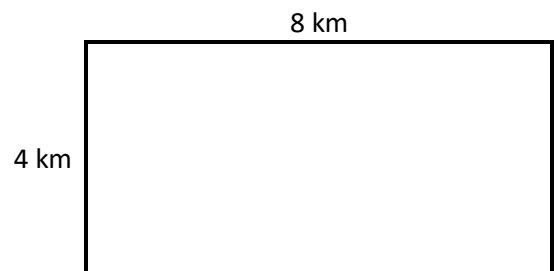
Perimeter = **24** cm



Perimeter = **16** km



Perimeter = **12** m



Perimeter = **24** km

Draw shapes with a perimeter of:

a) 10 cm

b) 8 cm

