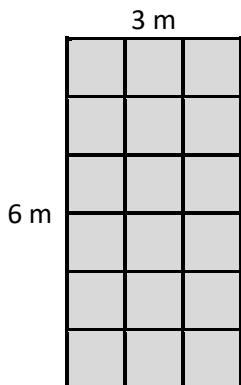


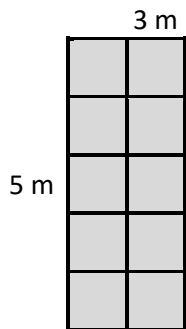
# Calculating Perimeter

Perimeter of a Rectangle = Side + Side + Side + Side

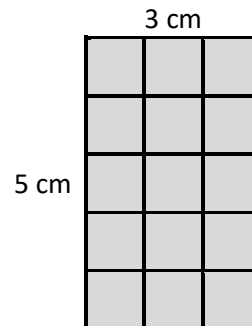
Find the perimeter of the following shapes.



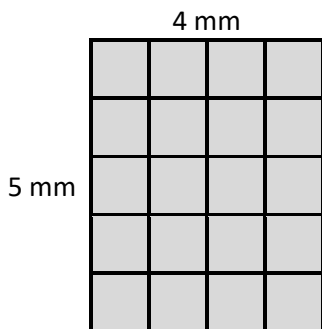
Perimeter = \_\_\_\_ m



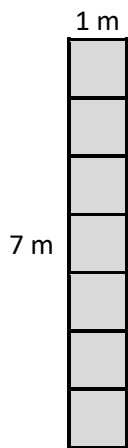
Perimeter = \_\_\_\_ m



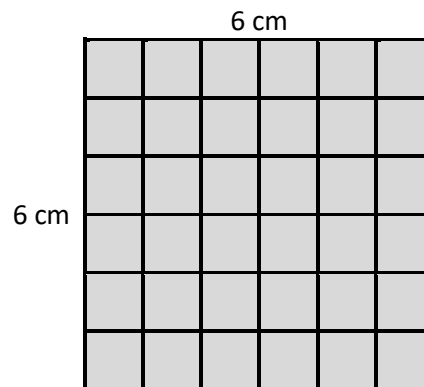
Perimeter = \_\_\_\_ cm



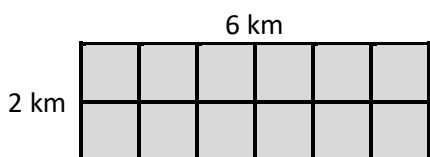
Perimeter = \_\_\_\_ mm



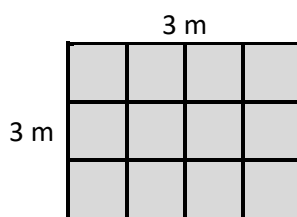
Perimeter = \_\_\_\_ m



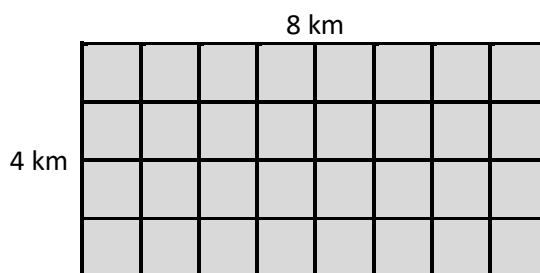
Perimeter = \_\_\_\_ cm



Perimeter = \_\_\_\_ km



Perimeter = \_\_\_\_ m




Perimeter = \_\_\_\_ km

Draw shapes with a perimeter of:

a) 10 cm

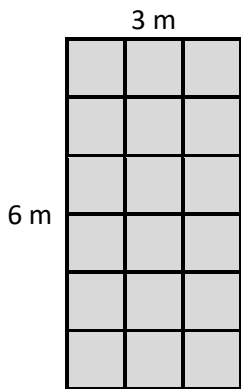
b) 8 cm



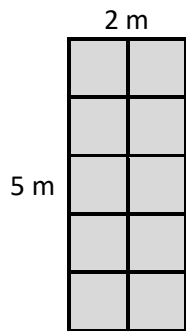
# Calculating Perimeter **Answers**

Perimeter of a Rectangle = Side + Side + Side + Side

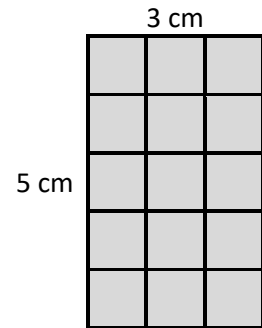
Find the perimeter of the following shapes.



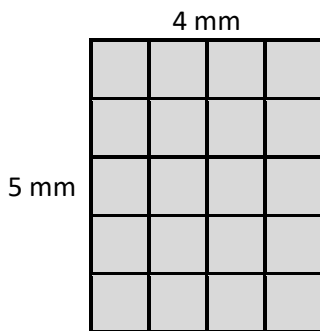
Perimeter = 18 m



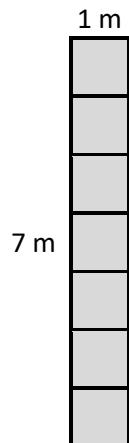
Perimeter = 14 m



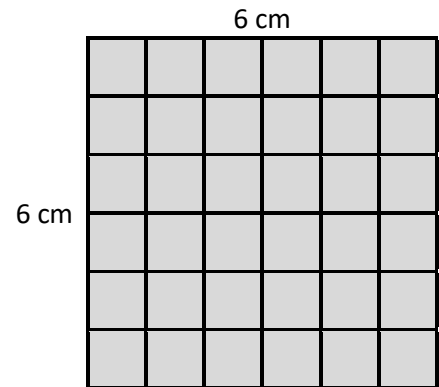
Perimeter = 16 cm



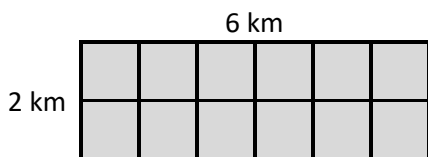
Perimeter = 18 mm



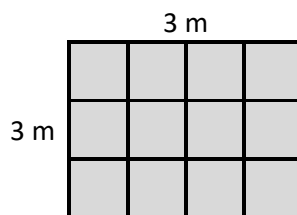
Perimeter = 16 m



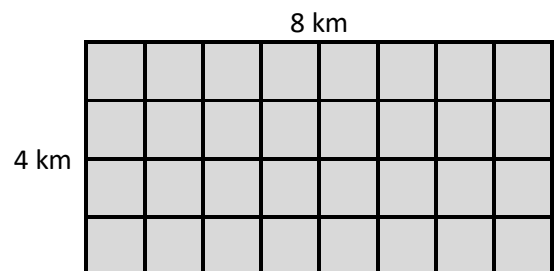
Perimeter = 24 cm



Perimeter = 16 km



Perimeter = 12 m



Perimeter = 24 km

Draw shapes with a perimeter of:

a) 10 cm

b) 8 cm

