



Addition

Count and add. Write number sentences to match.

 $+$
 $=$

$$\underline{\quad} + \underline{\quad} = \underline{\quad}$$

 $+$
 $=$

$$\underline{\quad} + \underline{\quad} = \underline{\quad}$$

 $+$
 $=$

$$\underline{\quad} + \underline{\quad} = \underline{\quad}$$

 $+$
 $=$

$$\underline{\quad} + \underline{\quad} = \underline{\quad}$$

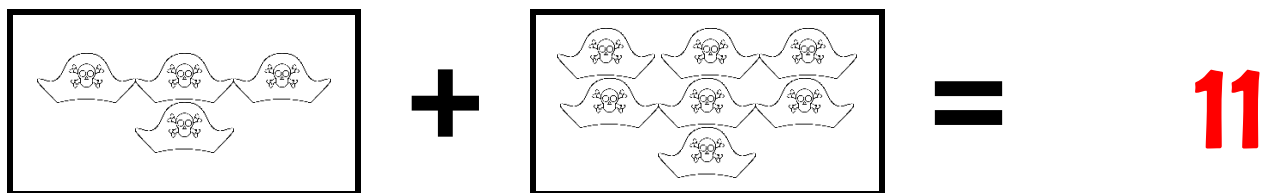
 $+$
 $=$

$$\underline{\quad} + \underline{\quad} = \underline{\quad}$$

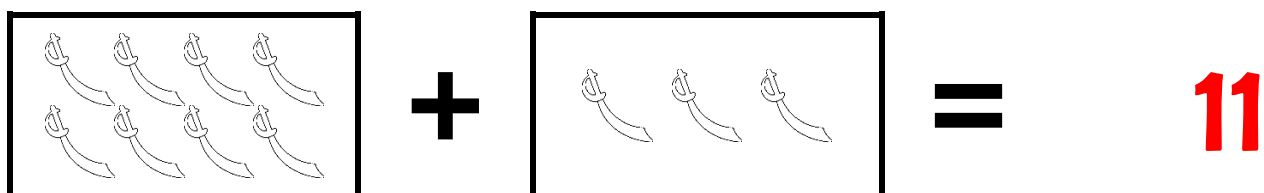


Addition Answers


Count and add. Write number sentences to match.



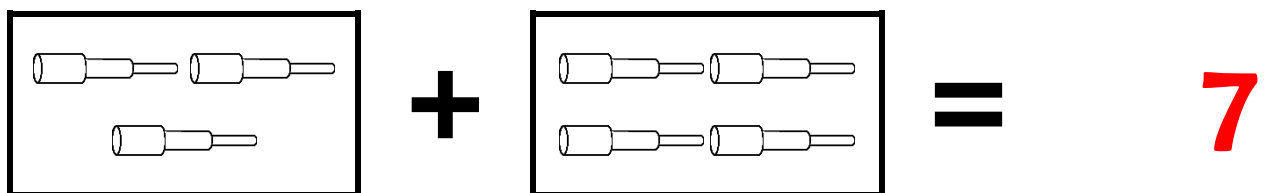
$$4 + 7 = 11$$




$$8 + 3 = 11$$



$$7 + 2 = 9$$



$$3 + 4 = 7$$



$$6 + 2 = 8$$