







Pirate Problem Solving

<p>Blackbeard had 9 gold coins. He dropped 5 into the water. How many gold coins does Blackbeard have left?</p>	<p>Draw</p> 
---	---

<p>There were 7 mice on the ship. 5 of them were caught. How many mice were left on the ship?</p>	<p>Draw</p> 
---	--

<p> The pirates had 8 mugs of stew on the table. They ate 4 of the mugs. How many mugs of stew are left?</p>	<p>Draw</p>
---	-------------

<p>The ship had 7 sails. During a storm, 2 of the sails broke. How many working sails did the pirates have left?</p>	<p>Draw</p> 
--	---

Pirate Problem Solving **Answers**

Blackbeard had 9 gold coins. He dropped 5 into the water.
How many gold coins does Blackbeard have left?

Blackbeard has 4 gold coins left.

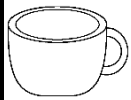
Draw



There were 7 mice on the ship. 5 of them were caught.
How many mice were left on the ship?

2 mice were left on the ship.

Draw



The pirates had 8 mugs of stew on the table.
They ate 4 of the mugs.
How many mugs of stew are left?

There are 4 mugs left.

Draw

The ship had 7 sails. During a storm, 2 of the sails broke.
How many working sails did the pirates have left?

The pirates have 5 working sails left.

Draw

