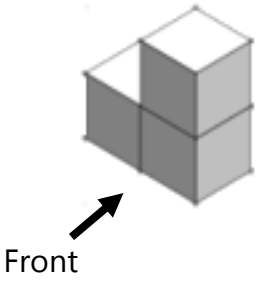
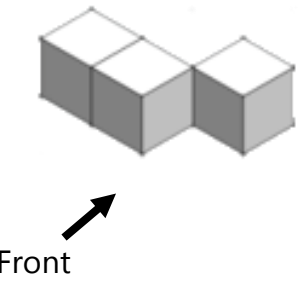
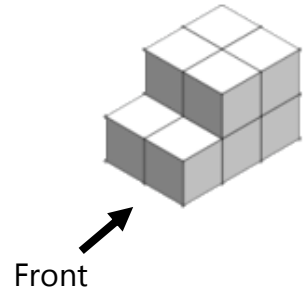


Plans and Elevations

Draw the front view, side view and top view of each of the following:

3D Object	Front View	Side View	Top View
	<p>Grid for drawing the front view of the first object.</p>	<p>Grid for drawing the side view of the first object.</p>	<p>Grid for drawing the top view of the first object.</p>
	<p>Grid for drawing the front view of the second object.</p>	<p>Grid for drawing the side view of the second object.</p>	<p>Grid for drawing the top view of the second object.</p>
	<p>Grid for drawing the front view of the third object.</p>	<p>Grid for drawing the side view of the third object.</p>	<p>Grid for drawing the top view of the third object.</p>

Plans and Elevations Answers

Draw the front view, side view and top view of each of the following:

3D Object	Front View	Side View	Top View
