




Probability of Events



Write 5 events to match each of the following terms.

Impossible:

1. _____

2. _____

3. _____

4. _____

5. _____

Unlikely:

1. _____

2. _____

3. _____

4. _____

5. _____

Likely:

6. _____

7. _____

8. _____

9. _____

10. _____

Certain:

1. _____

2. _____

3. _____

4. _____

5. _____