


Reading a Timetable


Use the timetable below to answer the questions.



Morning Service		Montville to Clapham				
Monday to Friday						
Montville		5:24am	5:54am	6:24am	6:54am	7:24am
Burleigh		5:46am	6:16am	6:46am	7:16am	7:24am
Green Lake		5:53am	6:23am	6:53am	7:23am	7:53am
Charlie St		6:02am	6:32am	7:02am	7:32am	8:02am
Woodford		6:08am	6:38am	7:08am	7:38am	8:08am
Newark		6:20am	6:50am	7:20am	7:50am	8:20am
Dover St		6:27am	6:57am	7:27am	7:57am	8:27am
Clapham		6:45am	7:15am	7:45am	8:15am	8:45am


Afternoon Service		Montville to Clapham			
Monday to Friday					
Montville		2:32pm	3:02pm	3:32pm	4:02pm
Burleigh		2:54pm	3:24pm	3:54pm	4:24pm
Green Lake		3:01pm	3:31pm	4:01pm	4:31pm
Charlie St		3:10pm	---	4:10pm	4:40pm
Woodford		3:16pm	3:44pm	4:16pm	4:46pm
Newark		3:28pm	3:56pm	---	4:58pm
Dover St		3:35pm	4:03pm	4:33pm	5:05pm
Clapham		3:53pm	4:21pm	4:51pm	5:23pm

1. What time does the last train of the morning leave Montville?
2. Lisa needs to get from Green Lake to Woodford in the morning. How long will the journey take?
3. Dan needs to get to Clapham as early as he can. What time is the earliest time he can get there by train?
4. Mary lives in Burleigh and has a meeting in Newark at 7:45am. Which train should she get?
5. Graham catches the 1502 train from Montville and gets off at Dover St. How many stops does the train make along the way?
6. The trip between which two stations is longest? How long is it in minutes?
7. Two of the afternoon trains have a shorter overall journey time than the other two. Which are the two quickest journeys and why are they quicker?



Reading a Timetable **Answers**

Use the timetable below to answer the questions.



Morning Service		Montville to Clapham				
Monday to Friday						
Montville		5:24am	5:54am	6:24am	6:54am	7:24am
Burleigh		5:46am	6:16am	6:46am	7:16am	7:24am
Green Lake		5:53am	6:23am	6:53am	7:23am	7:53am
Charlie St		6:02am	6:32am	7:02am	7:32am	8:02am
Woodford		6:08am	6:38am	7:08am	7:38am	8:08am
Newark		6:20am	6:50am	7:20am	7:50am	8:20am
Dover St		6:27am	6:57am	7:27am	7:57am	8:27am
Clapham		6:45am	7:15am	7:45am	8:15am	8:45am

Afternoon Service		Montville to Clapham			
Monday to Friday					
Montville		2:32pm	3:02pm	3:32pm	4:02pm
Burleigh		2:54pm	3:24pm	3:54pm	4:24pm
Green Lake		3:01pm	3:31pm	4:01pm	4:31pm
Charlie St		3:10pm	---	4:10pm	4:40pm
Woodford		3:16pm	3:44pm	4:16pm	4:46pm
Newark		3:28pm	3:56pm	---	4:58pm
Dover St		3:35pm	4:03pm	4:33pm	5:05pm
Clapham		3:53pm	4:21pm	4:51pm	5:23pm

1. What time does the last train of the morning leave Montville? **7:42am**
2. Lisa needs to get from Green Lake to Woodford in the morning. How long will the journey take? **15 minutes**
3. Dan needs to get to Clapham as early as he can. What time is the earliest time he can get there by train? **6:45am**
4. Mary lives in Burleigh and has a meeting in Newark at 7:45am. Which train should she get? **6:46am train / Third train of the day**
5. Graham catches the 1502 train from Montville and gets off at Dover St. How many stops does the train make along the way? **4 stops + his final stop in Dover St**
6. The trip between which two stations is longest? How long is it in minutes? **Montville to Burleigh 22 minutes**
7. Two of the afternoon trains have a shorter overall journey time than the other two. Which are the two quickest journeys and why are they quicker? **The second and third trains. They make fewer stops.**

