
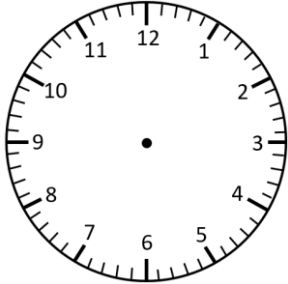


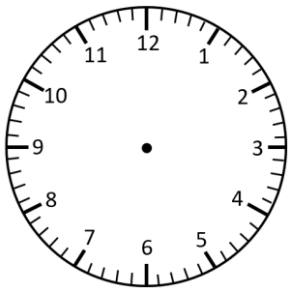
Representing Time: Digital & Analogue

1 Minute Intervals

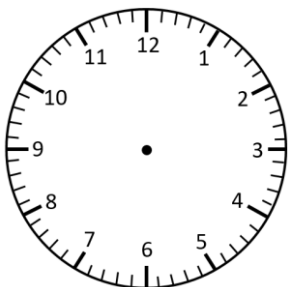
Read the times and represent in **analogue** and **digital** forms.




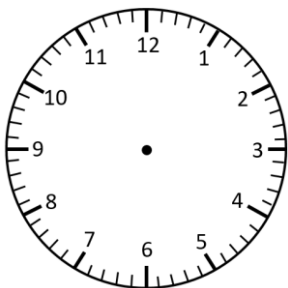
sixteen to 2




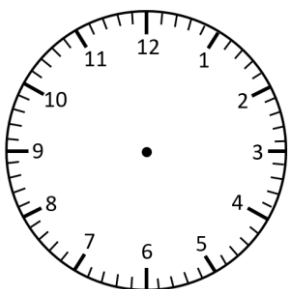
twenty-three past 4



3 minutes to 9



twelve past 11

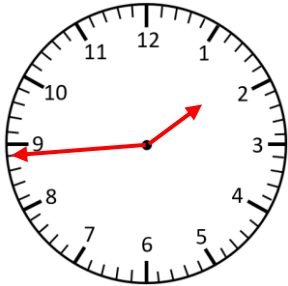


twenty-two to 6

Representing Time: Digital & Analogue **Answers**

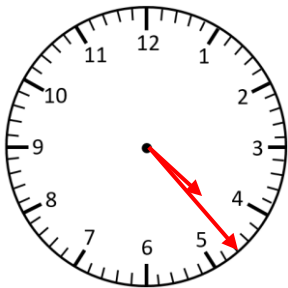
1 Minute Intervals

Read the times and represent in **analogue** and **digital** forms.



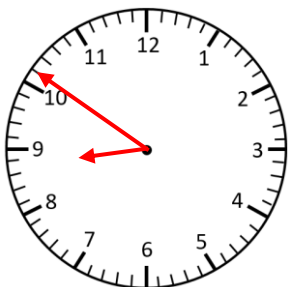
1 : 44

sixteen to 2



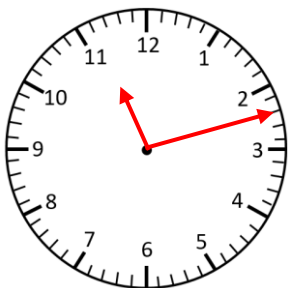
4 : 23

twenty-three past 4



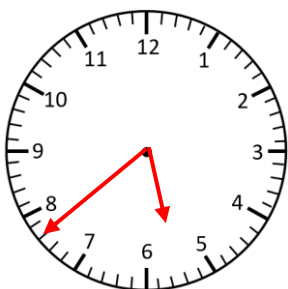
8 : 51

3 minutes to 9



11 : 12

twelve past 11



5 : 38

twenty-two to 6