

Rainbow Facts

Addition & Subtraction Strategies

Numbers that add together to make 10 are called Rainbow Facts.


For example: $4 + 6 = 10$

Can you find $4 + 6$ on the rainbow?

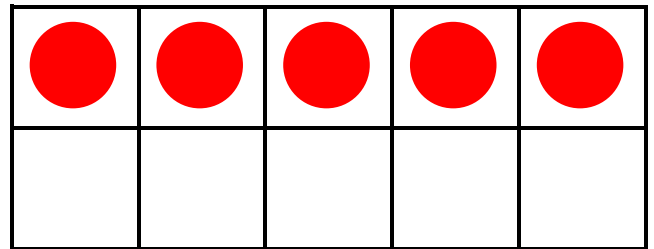


1. Use the Ten Frames to help solve each fact.


$$2 + \underline{\quad} = 10$$



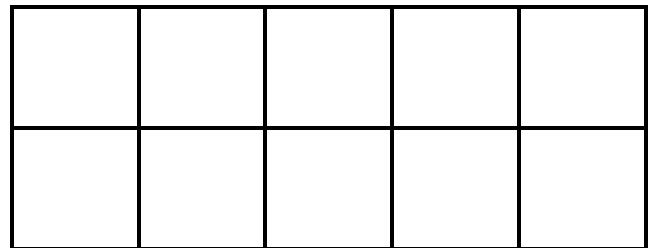
$$5 + \underline{\quad} = 10$$



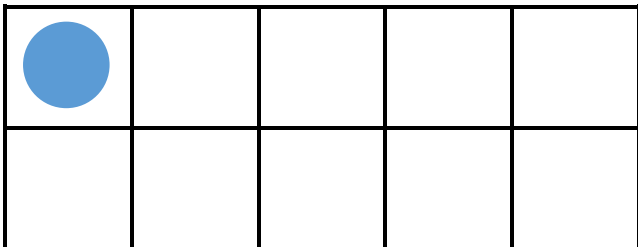
$$3 + \underline{\quad} = 10$$




$$0 + \underline{\quad} = 10$$



$$1 + \underline{\quad} = 10$$



$$4 + \underline{\quad} = 10$$



2. Solve the Rainbow Facts as quickly as you can!

$5 + \underline{\quad} = 10$

$7 + \underline{\quad} = 10$

$\underline{\quad} + 1 = 10$

$\underline{\quad} + 6 = 10$

$\underline{\quad} + 3 = 10$

$2 + \underline{\quad} = 10$

$\underline{\quad} + 4 = 10$

$9 + \underline{\quad} = 10$

$\underline{\quad} + 10 = 10$

$8 + \underline{\quad} = 10$

