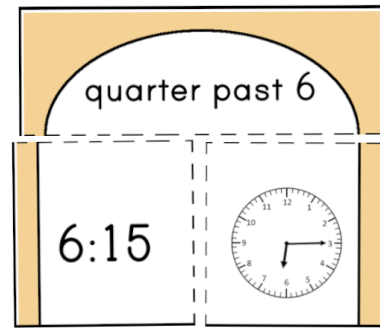


# Time Match

Match the representations of quarter to and quarter past times.



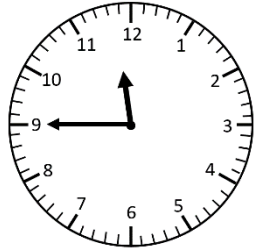
EASYTEACHING.NET

<p>quarter past 6</p> <p>6:15</p>	<p>quarter to 9</p> <p>8:45</p>
-----------------------------------	---------------------------------

<p>quarter to 2</p> <p>1:45</p>	<p>quarter past 11</p> <p>11:15</p>
---------------------------------	-------------------------------------

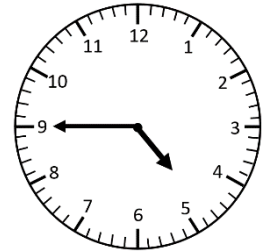
quarter to 12

11:45



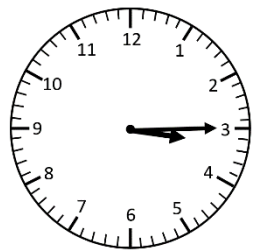
quarter to 5

4:45



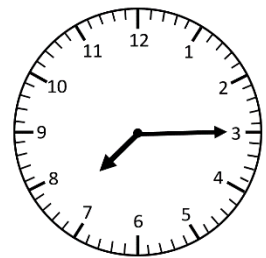
quarter past 3

3:15



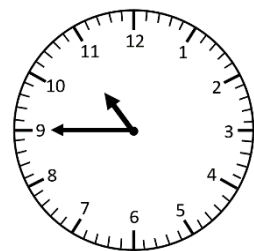
quarter past 7

7:15



quarter to 11

10:45



quarter to 4

3:45

