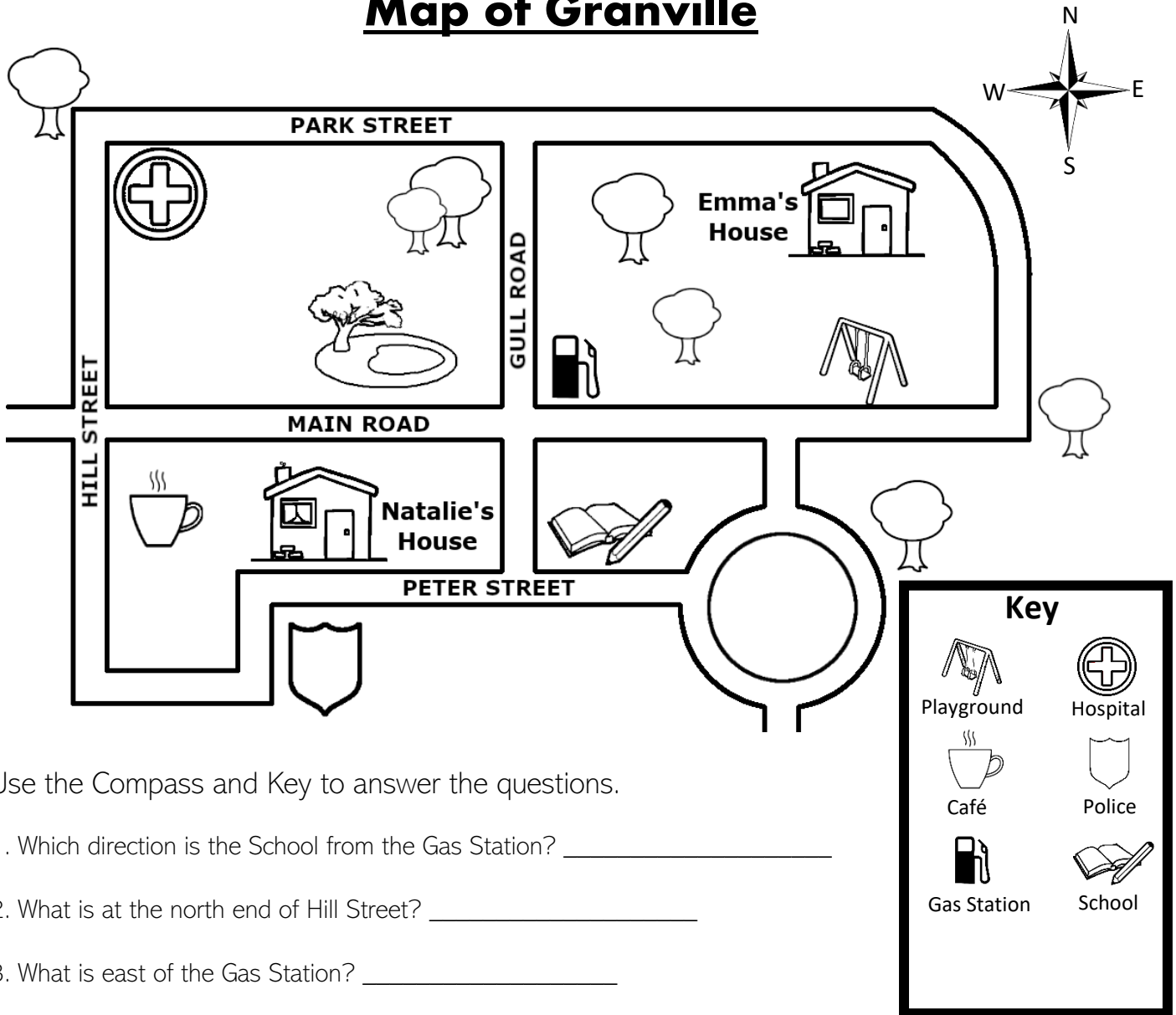


Map of Granville

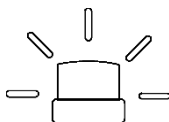





Use the Compass and Key to answer the questions.

1. Which direction is the School from the Gas Station? _____
2. What is at the north end of Hill Street? _____
3. What is east of the Gas Station? _____
5. A woman walks south from the Hospital. Where might she be going? _____
6. Draw a Pizza Shop east of the Hospital and north of the Gas Station. Add it to the Key.
7. Which direction is Emma's House from the Playground? _____
8. What direction does Natalie walk home from School? _____
9. Explain how Natalie could get from her house to the Hospital. _____

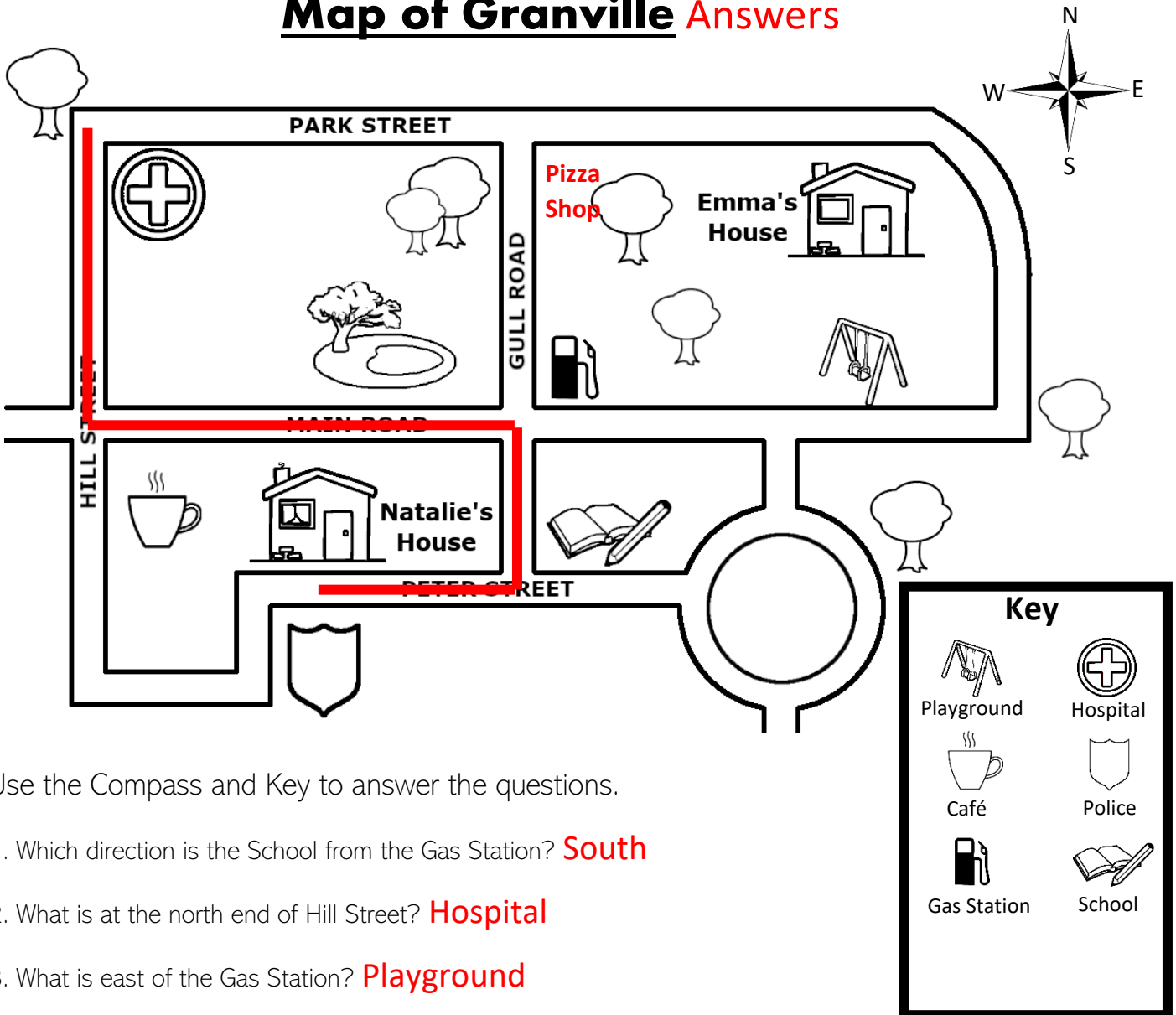
10. A police car leaves the Police Station and follows this route:
 -  East along Peter Street.

Draw the path of the police car on the map.



-  North up Gull Road
-  West along Main Road.
-  North up Hill Street.

Map of Granville **Answers**

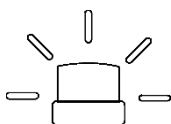


Use the Compass and Key to answer the questions.

1. Which direction is the School from the Gas Station? **South**
2. What is at the north end of Hill Street? **Hospital**
3. What is east of the Gas Station? **Playground**
5. A woman walks south from the Hospital. Where might she be going? **Café (answers may vary)**
6. Draw a Pizza Shop east of the Hospital and north of the Gas Station. Add it to the Key.
7. Which direction is Emma's House from the Playground? **North**
8. What direction does Natalie walk home from School? **West**
9. Explain how Natalie could get from her house to the Hospital. **Answers will vary.**

10. A police car leaves the Police Station and follows this route:

Draw the path of the police car on the map.



- East along Peter Street.
- North up Gull Road
- West along Main Road.
- North up Hill Street.