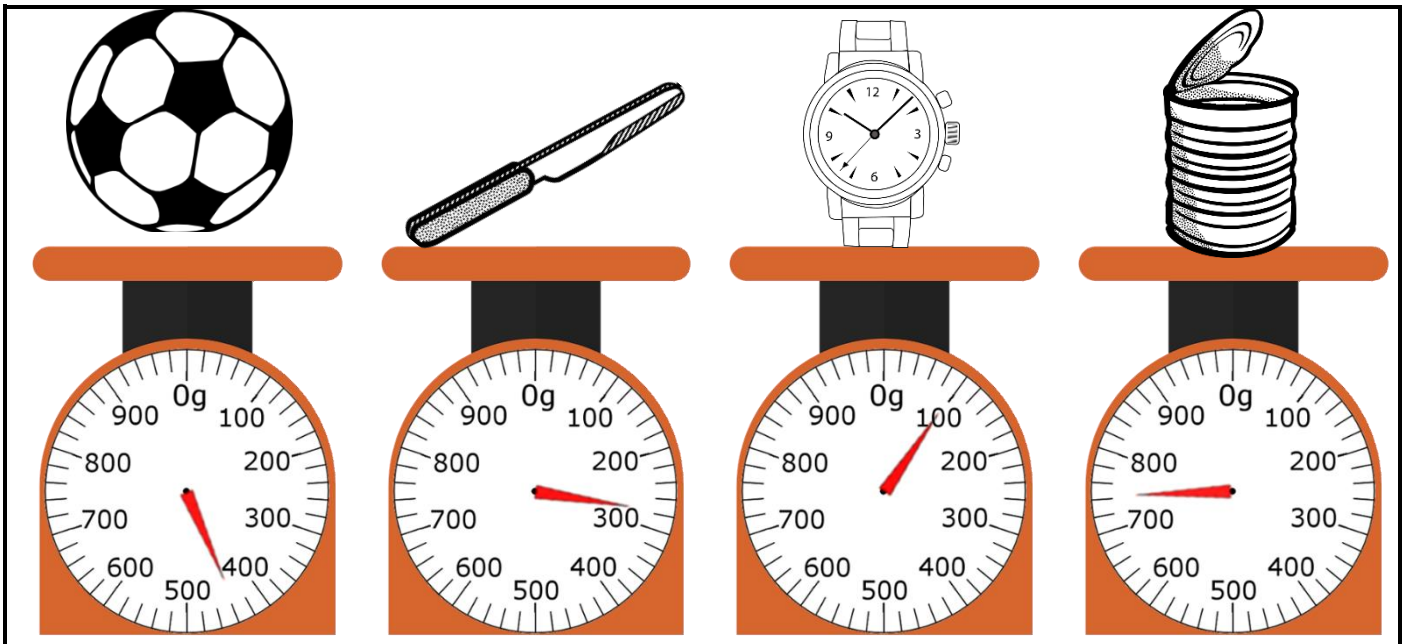


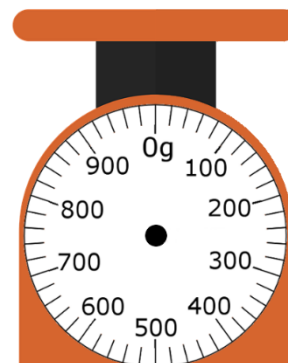
Weigh Station

$$1 \text{ kilogram (kg)} = 1\,000 \text{ grams (g)}$$

Read the weight of the items on the scales and answers the questions below.



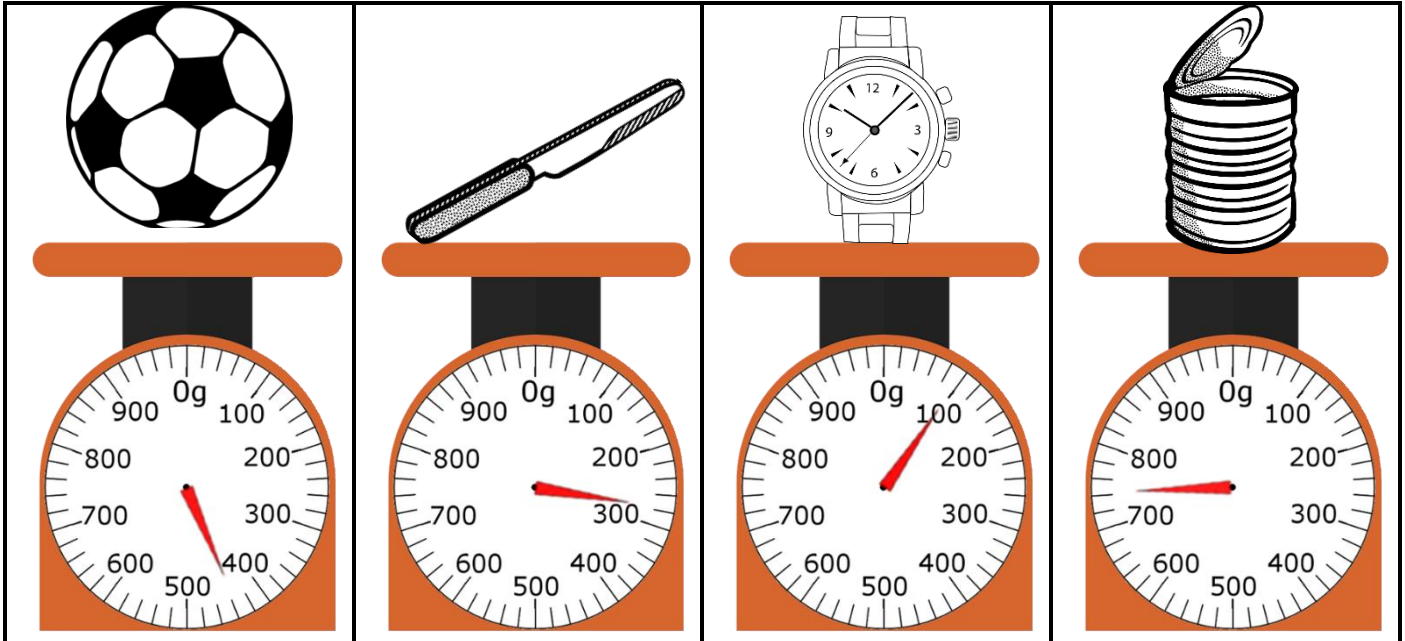
1. How much does the knife weigh? _____
2. Which item is heaviest? _____
3. Which item is lightest? _____
4. How much heavier is the knife than the watch? _____
5. Which item weighs closest to half a kilogram? _____
6. How many watches together would weigh exactly 1kg? _____
7. Draw an apple on the scales that is heavier than the watch but lighter than the knife. Record your chosen weight on the scale and on the line beside.



Weigh Station **Answers**

1 kilogram (kg)	=	1 000 grams (g)
------------------------	----------	------------------------

Read the weight of the items on the scales and answers the questions below.



1. How much does the knife weigh? **280g**
2. Which item is heaviest? **the can**
3. Which item is lightest? **the watch**
4. How much heavier is the knife than the watch? **180g**
5. Which item weighs closest to half a kilogram? **the ball**
6. How many watches together would weigh exactly 1kg? **ten watches**
7. Draw an apple on the scales that is heavier than the watch but lighter than the knife. Record your chosen weight on the scale and on the line beside.

Answers will vary

