

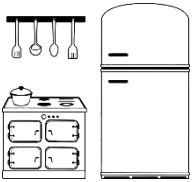
Word Problems

Addition & Subtraction Mix

1. At the Harbour Markets, 31,510 muffins were sold. Only 19,182 of the muffins had chocolate chips. How many muffins sold didn't have chocolate chips?



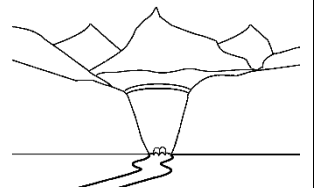
2. Tim sells fridges and ovens. Last year he sold a total of \$41,903 worth of fridges and a total of \$32,047 worth of ovens. How many dollars' worth of products did he sell last year?



3. Sienna is on a flight from Sydney to London. The flight is 16,983km long. She then Takes a flight from London to Anchorage which is 7,197km. Once Sienna arrives in Anchorage, how far has she flown?



4. The local dam held 98,466 megalitres of water. After the operators released some water, it only had 85,053 megalitres. How many megalitres of water were released from the dam?



5. Paula is playing Monster Trucks 2 and has three rounds to try and score 80,000 points. In the first round, she scored 31,041 points. In the second round Paula scored 20,667. How many points does she need in the third round to reach her target?



Word Problems **Answers**

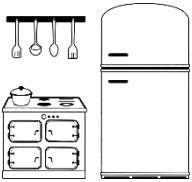
Addition & Subtraction Mix

1. At the Harbour Markets, 31,510 muffins were sold. Only 19,182 of the muffins had chocolate chips. How many muffins sold didn't have chocolate chips?

12,328 muffins



2. Tim sells fridges and ovens. Last year he sold a total of \$41,903 worth of fridges and a total of \$32,047 worth of ovens. How many dollars' worth of products did he sell last year?



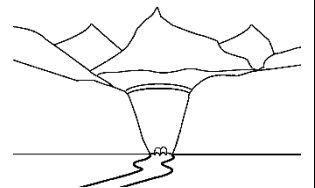
\$73,950

3. Sienna is on a flight from Sydney to London. The flight is 16,983km long. She then Takes a flight from London to Anchorage which is 7,197km. Once Sienna arrives in Anchorage, how far has she flown?



24,180km

4. The local dam held 98,466 megalitres of water. After the operators released some water, it only had 85,053 megalitres. How many megalitres of water were released from the dam?



13,412 megalitres

5. Paula is playing Monster Trucks 2 and has three rounds to try and score 80,000 points. In the first round, she scored 31,041 points. In the second round Paula scored 20,667. How many points does she need in the third round to reach her target?

28,292 points

