


Word Problems


Division

1. Stacey is organising her photos into an album. She can fit 4 photos on each page. Altogether she has 24 photos. How many pages will she need for all of her photos?




2. Mr Johnson is baking cakes for a bake sale. He has worked out that he needs 18 eggs to make 6 cakes. How many eggs will he put in each cake?

3. Jacqui has a packet of 32 chocolates. She wants to share them evenly into 4 bowls for the party. How many chocolates should she put in each bowl?



4. Bella made 25 friendship bracelets. She shared them equally among her 5 friends. How many bracelets did each friend receive?

5. The farmer planted a total of 27 apple trees in 3 even rows. How many apple trees were in each row?




Word Problems **Answers**

Division

1. Stacey is organising her photos into an album. She can fit 4 photos on each page. Altogether she has 24 photos. How many pages will she need for all of her photos?

6 pages




2. Mr Johnson is baking cakes for a bake sale. He has worked out that he needs 18 eggs to make 6 cakes. How many eggs will he put in each cake?

3 eggs

3. Jacqui has a packet of 32 chocolates. She wants to share them evenly into 4 bowls for the party. How many chocolates should she put in each bowl?

8 chocolates



4. Bella made 25 friendship bracelets. She shared them equally among her 5 friends. How many bracelets did each friend receive?

5 bracelets

5. The farmer planted a total of 27 apple trees in 3 even rows. How many apple trees were in each row?

9 apple trees

