


Word Problems


Elapsed Time: 5 Minute Intervals

1. Neil's favourite TV show finished at 6:00pm. It began 1 hour and 35 minutes earlier.
What time did the show begin?



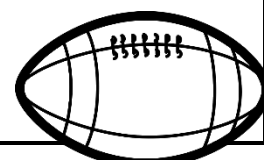
2. Sal is going to walk her dog. It is 4:55pm and she must be home by 5:30pm. Her normal walk takes her 50 minutes.
How many minutes late will she be if she goes on her normal walk?

3. Seth played his video game from 3:45pm until 5:10pm. He is only allowed to play video games for 80 minutes.
Has he broken the rule?



4. Allan's laptop battery lasts 4 hours and 30 minutes. He has already used the laptop for 1 hour and 15 minutes. He turns it on again at 7:40am.
What time will the battery run out?

5. The football match finished at 5:25pm. It went for 2 hours and 30 minutes.
What time did the match begin?



Word Problems Answers

Elapsed Time: 5 Minute Intervals

1. Neil's favourite TV show finished at 6:00pm. It began 1 hour and 35 minutes earlier.
What time did the show begin?

4:25pm



2. Sal is going to walk her dog. It is 4:55pm and she must be home by 5:30pm. Her normal walk takes her 50 minutes.


How many minutes late will she be if she goes on her normal walk?

15 minutes

3. Seth played his video game from 3:45pm until 5:10pm. He is only allowed to play video games for 80 minutes.

Has he broken the rule?

Yes, by 5 minutes



4. Allan's laptop battery lasts 4 hours and 30 minutes. He has already used the laptop for 1 hour and 15 minutes. He turns it on again at 7:40am.

What time will the battery run out?

10:55am

5. The football match finished at 5:25pm. It went for 2 hours and 30 minutes.

What time did the match begin?

3:55pm

