

Word Problems

Fractions

1. Pam has 16 birds. Half of the birds are yellow. How many birds are yellow?



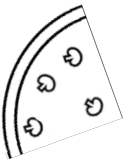
2. Max has 3 oranges. He cuts each into quarters. How many quarters does he have altogether?




3. Tim has 12 flowers. $\frac{1}{4}$ of them are red. How many of Tim's flowers are red?



4. Kate's pizza has been cut into quarters. On each quarter, there are 4 slices of mushroom.
How many slices of mushroom are on the whole pizza?



5. Jane's book has 28 pages. She has read $\frac{1}{4}$ of the book. How many pages has she read?



Word Problems **Answers**

Fractions

1. Pam has 16 birds. Half of the birds are yellow. How many birds are yellow?

8 birds are yellow.



2. Max has 3 oranges. He cuts each into quarters. How many quarters does he have altogether?

Max has 12 quarters altogether.



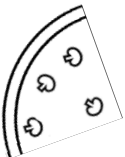
3. Tim has 12 flowers. $\frac{1}{4}$ of them are red. How many of Tim's flowers are red?

3 of Tim's flowers are red.



4. Kate's pizza has been cut into quarters. On each quarter, there are 4 slices of mushroom. How many slices of mushroom are on the whole pizza?

There are 16 slices of mushroom on the whole pizza.



5. Jane's book has 28 pages. She has read $\frac{1}{4}$ of the book. How many pages has she read?

Jane has read 7 pages.

