


Multi-Step Word Problems

Addition & Subtraction

1. Gili has a collection of 32 shells. Over the weekend, she went to the beach with Mel. Gili found 7 new shells to add to her collection. Mel found 9 shells which she gave to Gili. How many shells does Gili have in her collection now?




2. Mr Hank, the sports teacher, must write a report card for all of his students. He has 34 students in the lower school, and 58 students in the upper school. If he has already written 19 report cards, how many more report cards does Mr Hank still need to write?



3. Tori delivers newspapers to 4 different streets. She has exactly 72 newspapers to deliver. In the first street, she delivers 14 papers. In the second street, she delivers 18 papers. She delivers 19 papers in the third street. How many newspapers must Tori deliver in the final street?

4. The Beach Side Café sold 63 smoothies in January. In February, 19 more smoothies were sold than in January. In total, how many smoothies were sold in January and February?



5. Brad is making bracelets for a school fundraiser. He needs to make a total of 84 bracelets. He made 37 after school during the week, and he made a further 39 on the weekend. His friend made 7 for him, but 1 of them broke. How many more bracelets does Brad still need to make?



Multi-Step Word Problems **Answers**

Addition & Subtraction

1. Gili has a collection of 32 shells. Over the weekend, she went to the beach with Mel. Gili found 7 new shells to add to her collection. Mel found 9 shells which she gave to Gili. How many shells does Gili have in her collection now?

48 shells



2. Mr Hank, the sports teacher, must write a report card for all of his students. He has 34 students in the lower school, and 58 students in the upper school. If he has already written 19 report cards, how many more report cards does Mr Hank still need to write?




73 report cards

3. Tori delivers newspapers to 4 different streets. She has exactly 72 newspapers to deliver. In the first street, she delivers 14 papers. In the second street, she delivers 18 papers. She delivers 19 papers in the third street. How many newspapers must Tori deliver in the final street?

21 newspapers

4. The Beach Side Café sold 63 smoothies in January. In February, 19 more smoothies were sold than in January. In total, how many smoothies were sold in January and February?

145 smoothies



5. Brad is making bracelets for a school fundraiser. He needs to make a total of 84 bracelets. He made 37 after school during the week, and he made a further 39 on the weekend. His friend made 7 for him, but 1 of them broke. How many more bracelets does Brad still need to make?



2 bracelets