



Multi-Step Word Problems

Addition & Subtraction


1. In December, Sammy's Shoes sold 852 pairs of shoes and 288 pairs of sandals. In January, they sold 709 pairs of shoes and 215 pairs of sandals. How many more sales did Sammy's Shoes make in December than January?



2. Lyn has \$213 in savings. The bike she wants normally costs \$248, but the bike shop is having a half-price sale. If Lyn buys the bike during the half-price sale, how much will she have left in savings?



3. A baker needs 308 eggs for a big order she is preparing. She already has 209 eggs, and her assistant is going to bring 23 eggs from home. How many more eggs will they need?



4. Last year, the animal shelter was looking after 493 stray dogs and 206 stray cats. Since then, they have found homes for 224 of the dogs and 138 of the cats. In total, how many cats and dogs are still in the animal shelter?



5. Two years ago 5,683 people lived in Hope Island. Since then 6,238 more people moved to Hope Island. During the same period 1,443 people left Hope Island. How many people currently live in Hope Island?




Multi-Step Word Problems **Answers**

Addition & Subtraction


1. In December, Sammy's Shoes sold 852 pairs of shoes and 288 pairs of sandals. In January, they sold 709 pairs of shoes and 215 pairs of sandals. How many more sales did Sammy's Shoes make in December than January?

216 sales




2. Lyn has \$213 in savings. The bike she wants normally costs \$248, but the bike shop is having a half-price sale. If Lyn buys the bike during the half-price sale, how much will she have left in savings?

\$89



3. A baker needs 308 eggs for a big order she is preparing. She already has 209 eggs, and her assistant is going to bring 23 eggs from home. How many more eggs will they need?

76 eggs



4. Last year, the animal shelter was looking after 493 stray dogs and 206 stray cats. Since then, they have found homes for 224 of the dogs and 138 of the cats. In total, how many cats and dogs are still in the animal shelter?



337 cats and dogs

5. Two years ago 5,683 people lived in Hope Island. Since then 6,238 more people moved to Hope Island. During the same period 1,443 people left Hope Island. How many people currently live in Hope Island?

10,478 people

