


Word Problems

Multiplication


1. Max makes hats. He stitches 3 stars on each hat. How many stars does he need to make 9 hats?




2. 6 cement trucks arrive at a building site. Each truck is carrying 5 tonnes of cement. In total, how many tonnes of cement have been brought to the building site?




3. Rhonda makes bracelets. Each bracelet has 8 red stones and 8 orange stones. How many stones of each colour will she need to make 7 bracelets?



4. Farmer Farley's chicken lays 4 eggs per week. How many eggs will she get over 3 weeks?



5. Mike is painting eggs for an art project. He paints 6 stripes on each egg. How many stripes will he paint if he makes 8 eggs?



Word Problems **Answers**

Multiplication


1. Max makes hats. He stitches 3 stars on each hat. How many stars does he need to make 9 hats?

27 stars




2. 6 cement trucks arrive at a building site. Each truck is carrying 5 tonnes of cement. In total, how many tonnes of cement have been brought to the building site?

30 tonnes




3. Rhonda makes bracelets. Each bracelet has 8 red stones and 8 orange stones. How many stones of each colour will she need to make 7 bracelets?

56 red & 56 orange



4. Farmer Farley's chicken lays 4 eggs per week. How many eggs will she get over 3 weeks?

12 eggs



5. Mike is painting eggs for an art project. He paints 6 stripes on each egg. How many stripes will he paint if he makes 8 eggs?

48 stripes

