

Estimating Length

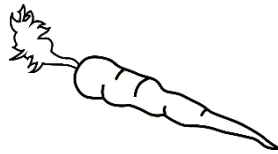
Centimetres & Metres

Estimate the length of each object. Circle your choice.



Bike

- 2m
- 30cm



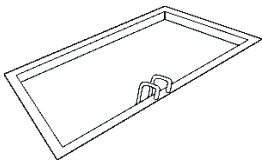
Carrot

- 60cm
- 20cm



Car

- 5m
- 1m



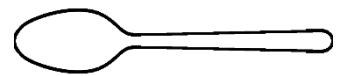
Pool

- 100cm
- 10m



Crocodile

- 4m
- 40cm



Spoon

- 15cm
- 5cm



Screwdriver

- 25cm
- 2m



Boat

- 2m
- 12m



Sock

- 30cm
- 3m

Draw something that is:

...less than 30cm

I estimate the length is

...between 1m and 5m

I estimate the length is


...more than 5m

I estimate the length is

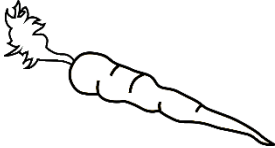
Estimating Length **Answers**

Centimetres & Metres


Estimate the length of each object. Circle your choice.



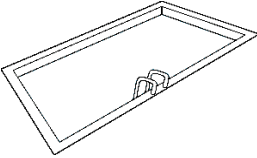
Bike
2m
30cm




Carrot
60cm
20cm



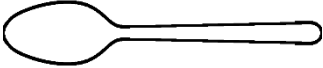
Car
5m
1m




Pool
100cm
10m




Crocodile
4m
40cm



Spoon
15cm
5cm



Screwdriver
25cm
2m



Boat
2m
12m



Sock
30cm
3m

Draw something that is:

...less than 30cm

Answers will vary.

I estimate the length is _____

...between 1m and 5m

Answers will vary.

I estimate the length is _____

...more than 5m

Answers will vary.

I estimate the length is _____