


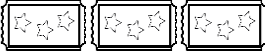

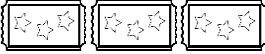
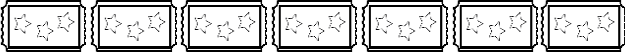



Interpreting Data

This graph shows how many tickets were sold during the week at the theatre.

Day	Tickets Sold
Saturday	
Sunday	
Monday	
Tuesday	
Wednesday	
Thursday	
Friday	




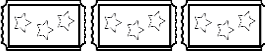

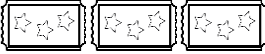
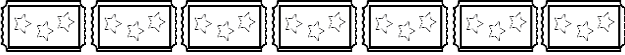



Use the data above to help you answer the questions.

- Which day had the most ticket sales? _____
- How many tickets were sold on Thursday? _____
- How many tickets were sold on Friday? _____
- How many tickets were sold on Monday? _____
- Which days had the same number of ticket sales? _____ , _____
- Which day had 6 ticket sales? _____
- How many tickets were sold on Saturday and Sunday together? _____
- How many more tickets were sold on Sunday than on Wednesday? _____

Interpreting Data **Answers**

This graph shows how many tickets were sold during the week at the theatre.

Day	Tickets Sold
Saturday	
Sunday	
Monday	
Tuesday	
Wednesday	
Thursday	
Friday	



Use the data above to help you answer the questions.

- Which day had the most ticket sales? **Saturday**
- How many tickets were sold on Thursday? **3**
- How many tickets were sold on Friday? **7**
- How many tickets were sold on Monday? **1**
- Which days had the same number of ticket sales? **Tuesday, Thursday**
- Which day had 6 ticket sales? **Sunday**
- How many tickets were sold on Saturday and Sunday together? **14**
- How many more tickets were sold on Sunday than on Wednesday? **4**