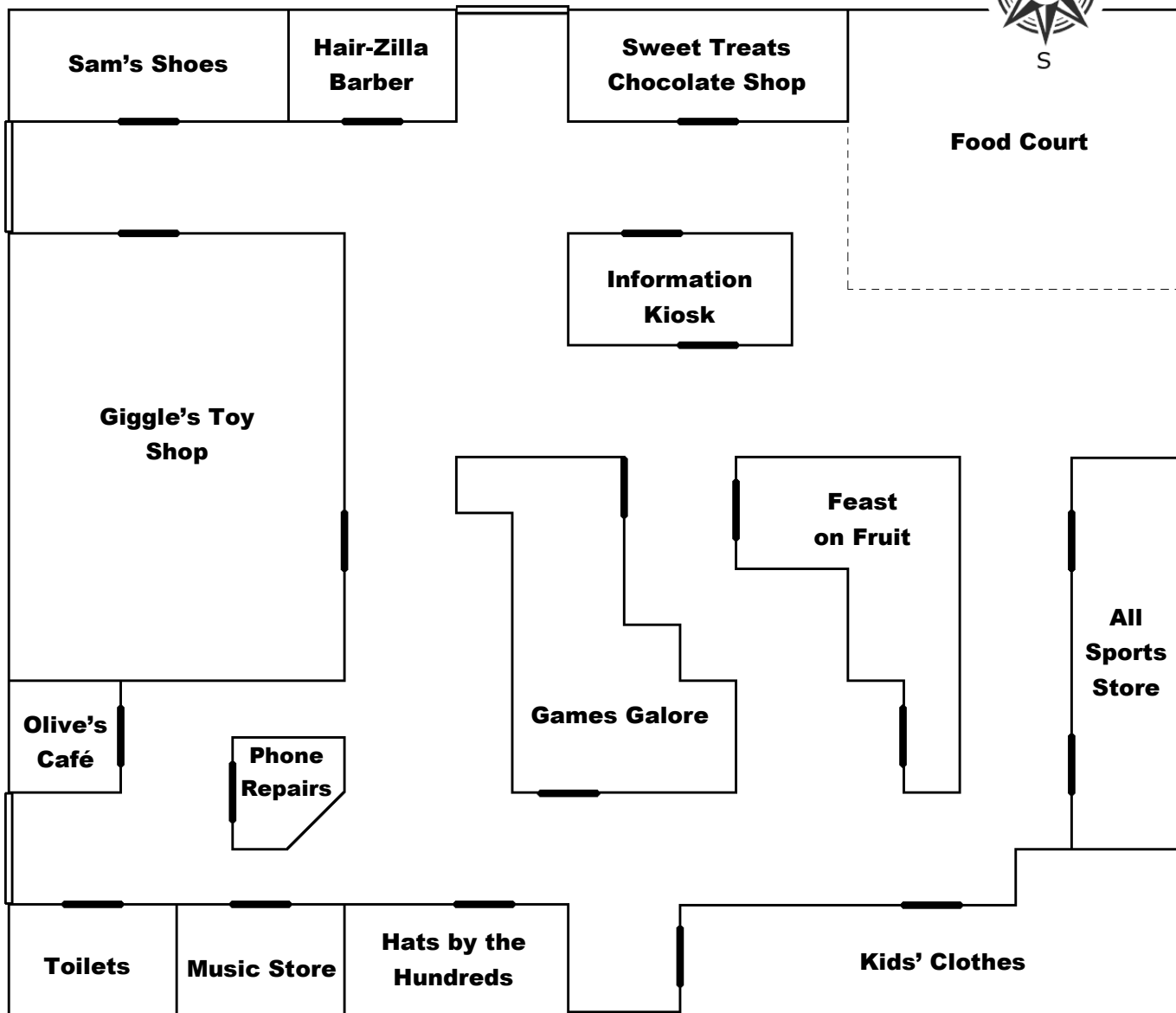
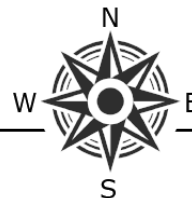


# Shopping Centre

## Cardinal Directions



- Use the compass to help answer the following questions.
  - Which shop is located **east** of **Feast on Fruit**? \_\_\_\_\_
  - Which three shops are **west** of **Games Galore**? \_\_\_\_\_, \_\_\_\_\_, \_\_\_\_\_
- Use the words **north**, **south**, **east** and **west** to complete the sentences.
  - Games Galore** is \_\_\_\_\_ of **Information Kiosk**.
  - The **toilets** are \_\_\_\_\_ of **Kids' Clothes**.
  - Hair-Zilla** is \_\_\_\_\_ of **Phone Repairs**.
  - All Sports** is \_\_\_\_\_ of **Giggle's Toy Shop**.
- Sam left his **shoe store** and walked to the **toilets**.  
Draw one possible path on the map. Use directional language to describe the path.

---



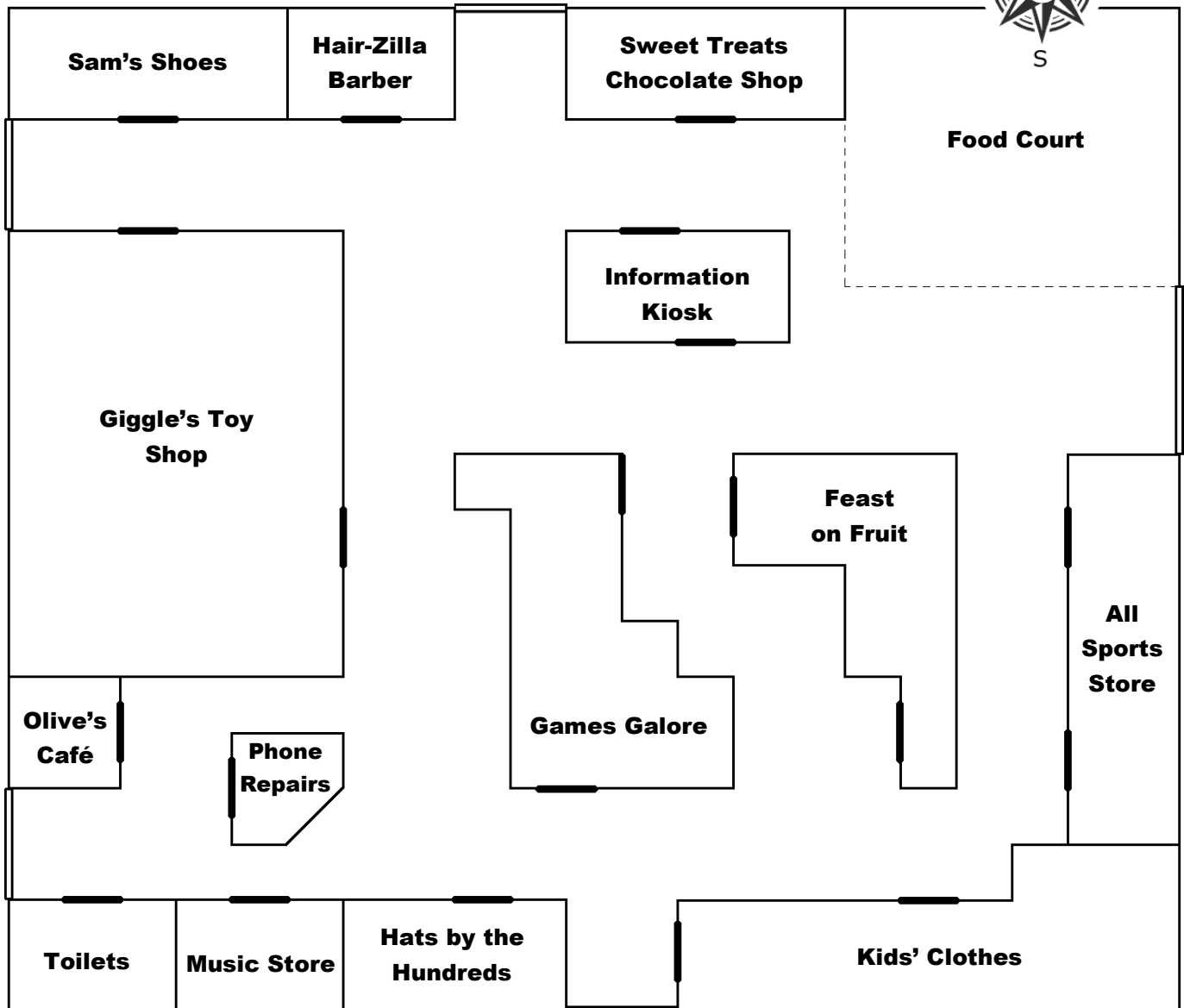
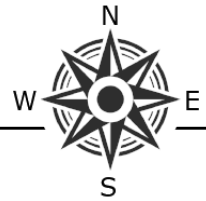
---



---

# Shopping Centre **Answers**

## Cardinal Directions



1. Use the compass to help answer the following questions.

- Which shop is located **east** of **Feast on Fruit**? **All Sports Store**
- Which three shops are **west** of **Games Galore**? **Toy Shop, Olive's Café, Phone Repairs**

2. Use the words **north**, **south**, **east** and **west** to complete the sentences.

- Games Galore** is **south** of the **Information Kiosk**.
- The **toilets** are **west** of **Kids' Clothes**.
- Hair-Zilla** is **north** of **Phone Repairs**.
- All Sports** is **east** of **Giggle's Toy Shop**.

3. Sam left his **shoe store** and walked to the **toilets**.

Draw one possible path on the map. Use directional language to describe the path.

**Answers will vary.**