

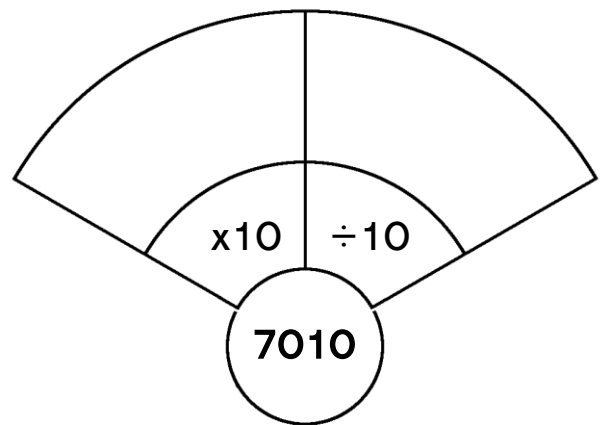
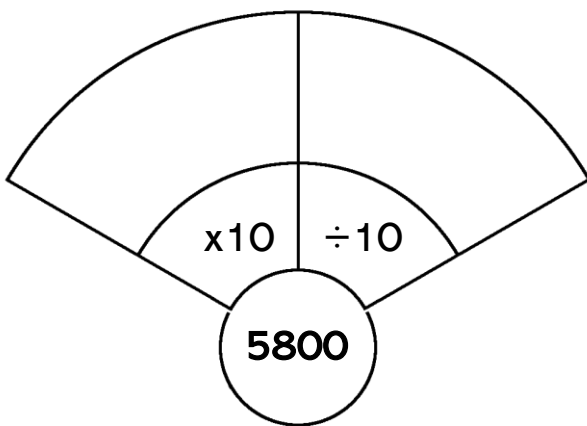
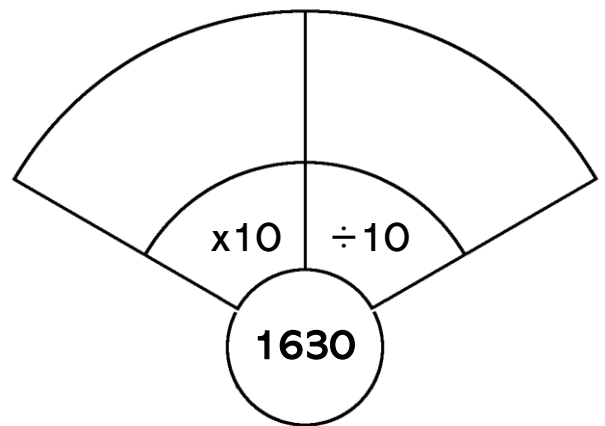
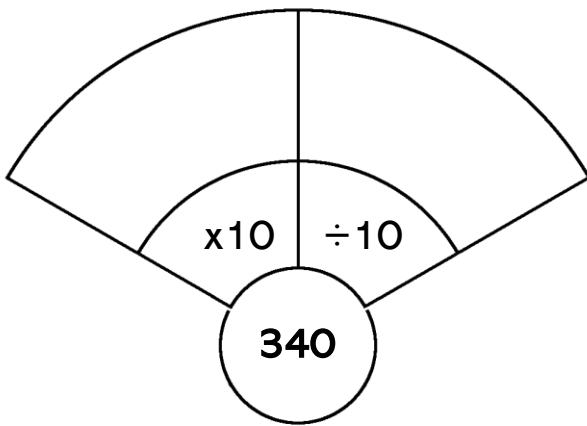
Multiply & Divide Numbers by 10

1. Complete the tables by multiplying and dividing by 10.

	$\times 10$
62	
203	
78	
39	

	$\div 10$
540	
120	
2820	
7160	

2. Multiply and divide each centre number by 10.



3. Complete the tables below.

	$\times 10$
86	
	640
360	
	4090

	$\div 10$
3430	
7200	
	18
	1206

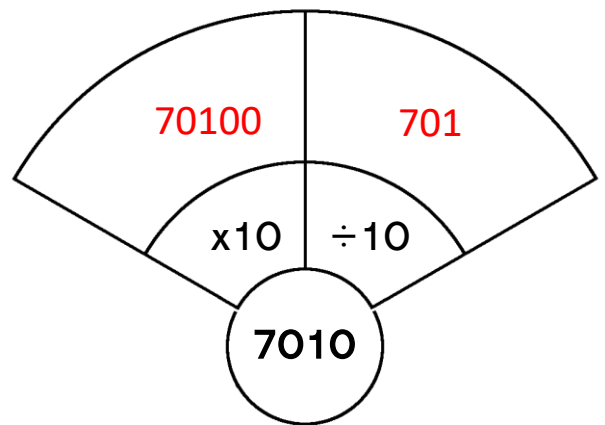
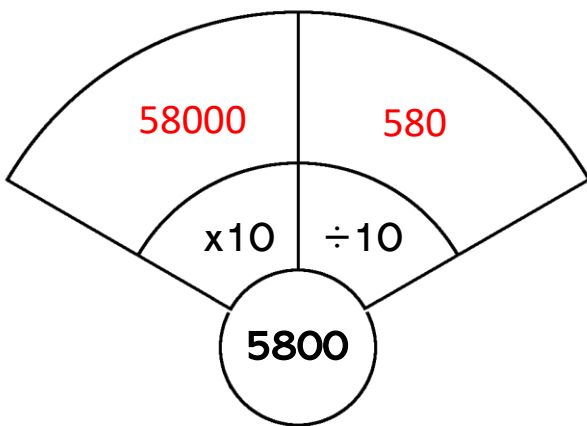
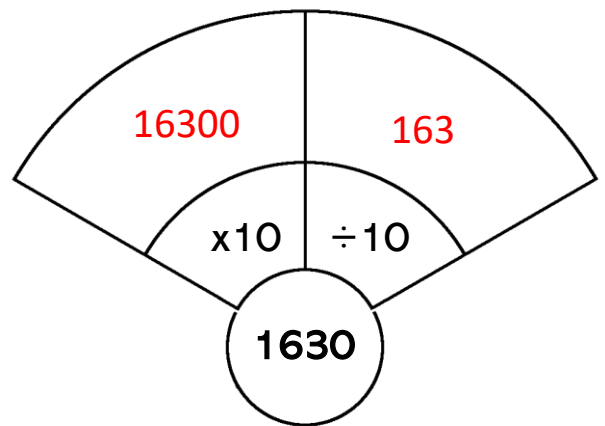
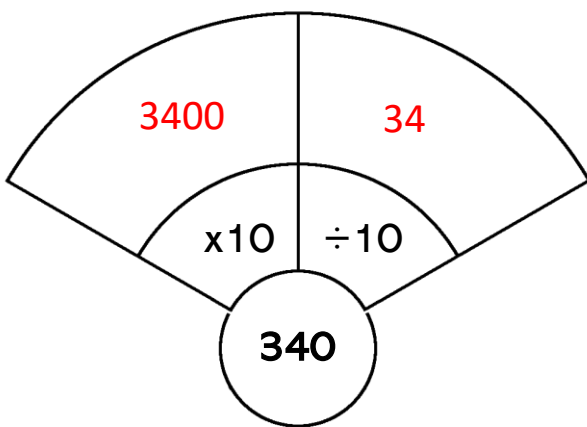
Multiply & Divide Numbers by 10 **Answers**

1. Complete the tables by multiplying and dividing by 10.

	x10
62	620
203	2030
78	780
39	390

	÷10
540	54
120	12
2820	282
7160	716

2. Multiply and divide each centre number by 10.



3. Complete the tables below.

	x10
86	860
64	640
360	3600
409	4090

	÷10
3430	343
7200	720
180	18
12060	1206