

# Multiply & Divide Numbers

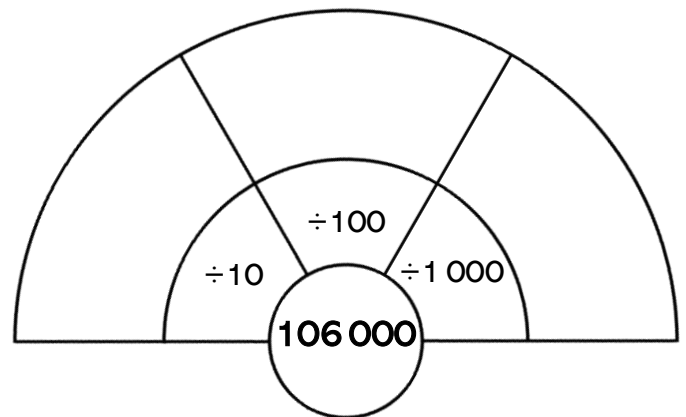
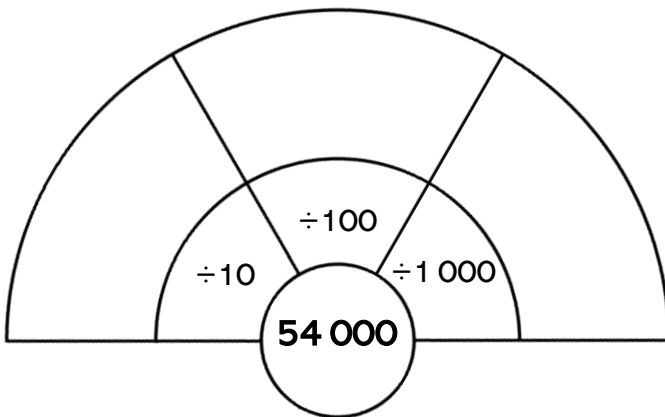
## by 10, 100 & 1 000

1. Complete the tables by multiplying and dividing by 10 and 100.

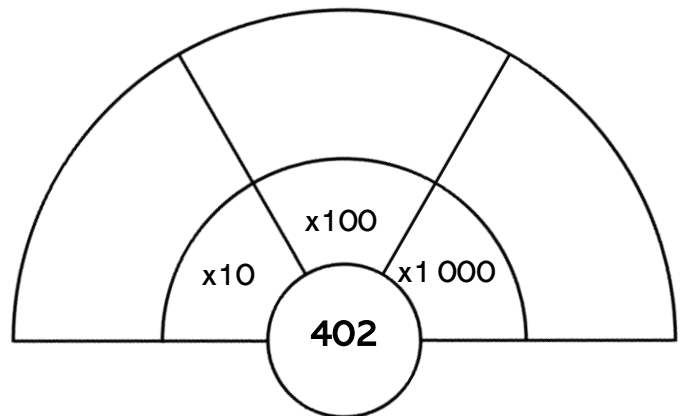
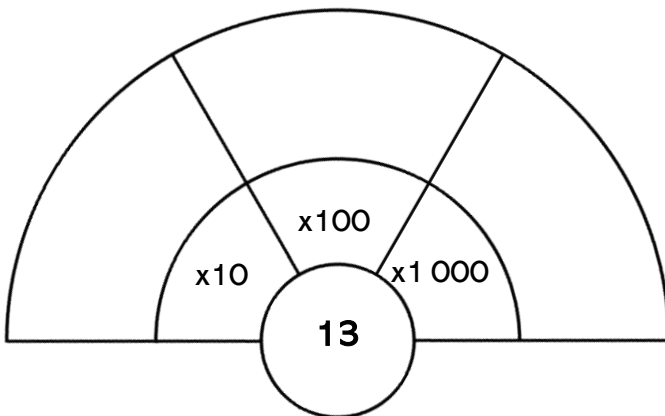
	x10	x100
62		
203		
78		
390		

	÷10	÷100
5 400		
1 200		
8 200		
7 000		

2. Divide the centre numbers by 10, 100 and 1000.



3. Multiply the centre numbers by 10, 100 and 1000.



4. Complete the tables below.

	x1000
28	
	4 000
70	
	59 000

	÷1000
	413
504 000	
	57
61 000	

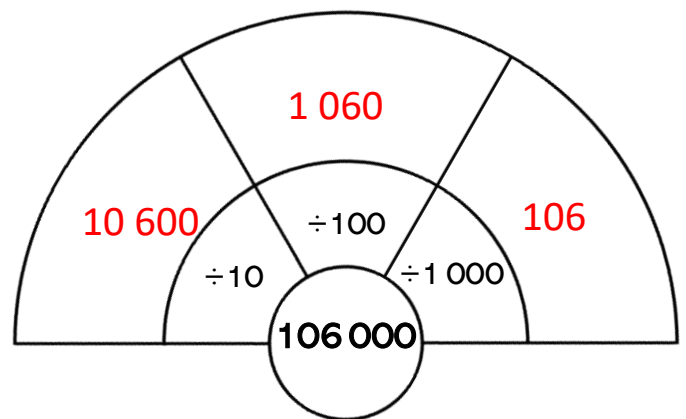
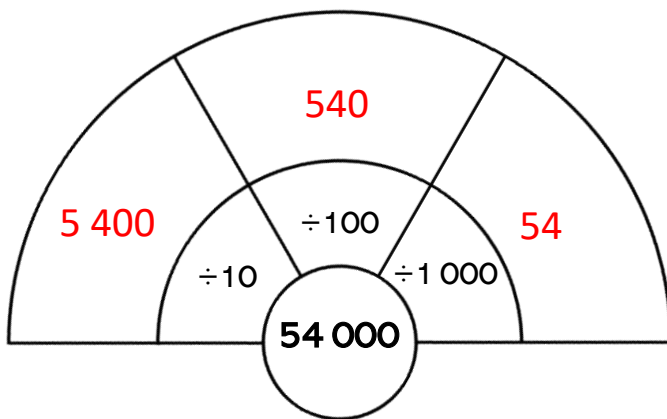
# Multiply & Divide Numbers **Answers** by 10, 100 & 1 000

1. Complete the tables by multiplying and dividing by 10 and 100.

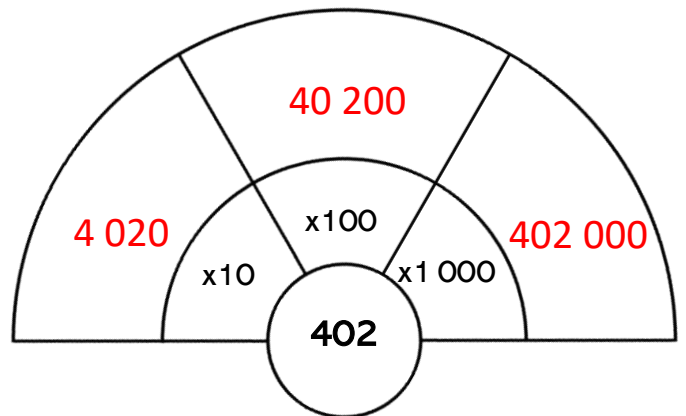
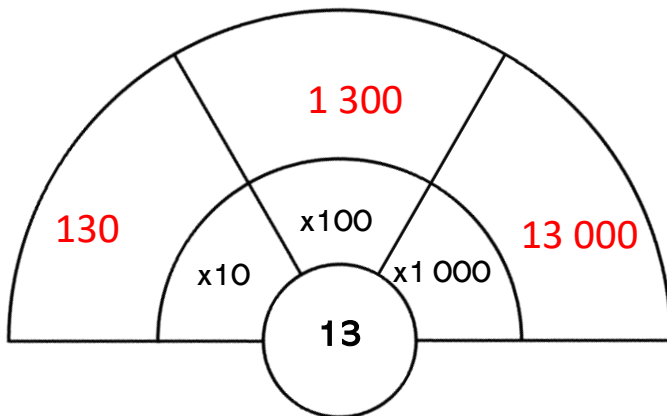
	x10	x100
62	620	6 200
203	2 030	20 300
78	780	7 800
390	3 900	39 000

	÷10	÷100
5 400	540	54
1 200	120	12
8 200	820	82
7 000	700	70

2. Divide the centre numbers by 10, 100 and 1000.



3. Multiply the centre numbers by 10, 100 and 1000.



4. Complete the tables below.

	x1000
28	28 000
4	4 000
70	70 000
59	59 000

	÷1000
413 000	413
504 000	504
57 000	57
61 000	61